

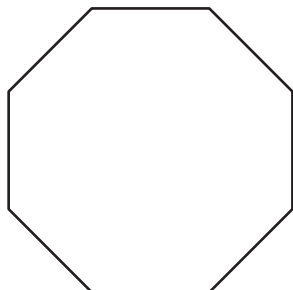
Name : _____

Sum of Interior Angles

ES1

Find the sum of the interior angles of each polygon.

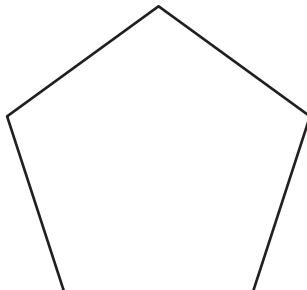
1)



Number of sides = _____

Sum of the interior angles = _____

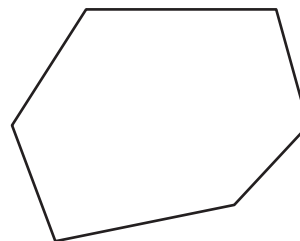
2)



Number of sides = _____

Sum of the interior angles = _____

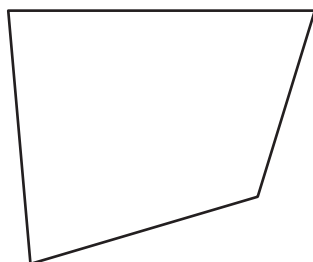
3)



Number of sides = _____

Sum of the interior angles = _____

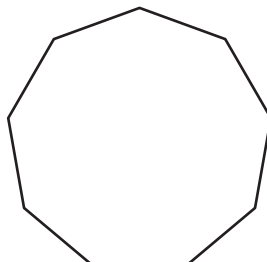
4)



Number of sides = _____

Sum of the interior angles = _____

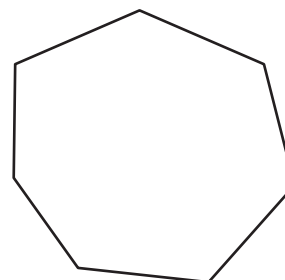
5)



Number of sides = _____

Sum of the interior angles = _____

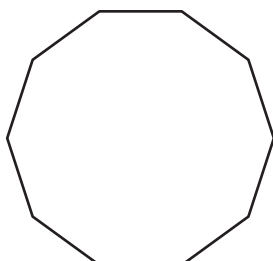
6)



Number of sides = _____

Sum of the interior angles = _____

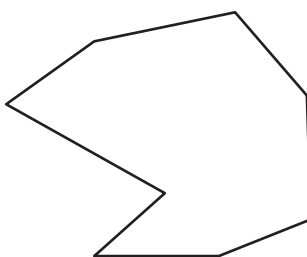
7)



Number of sides = _____

Sum of the interior angles = _____

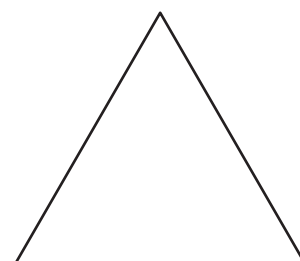
8)



Number of sides = _____

Sum of the interior angles = _____

9)



Number of sides = _____

Sum of the interior angles = _____