


Name : _____

Sum of Interior Angles

MS5

Find the sum of the interior angles of each polygon.

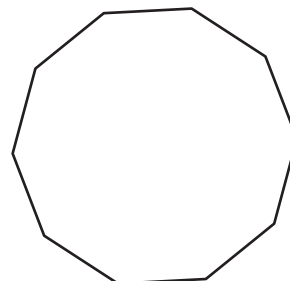
1)



Number of sides = _____

Sum of the interior angles = _____

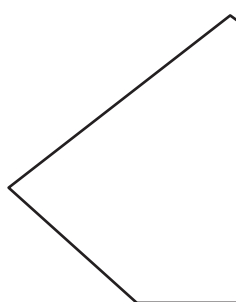
2)



Number of sides = _____


Sum of the interior angles = _____

3)



Number of sides = _____

Sum of the interior angles = _____



Number of sides = _____

Sum of the interior angles = _____

5) 22-gon

Number of sides = _____

Sum of the interior angles = _____

Number of sides = _____

Sum of the interior angles = _____

7) 17-gon

Number of sides = _____

Sum of the interior angles = _____

8) 11-gon

Number of sides = _____

Sum of the interior angles = _____

PREVIEW

Gain complete access to the largest collection of worksheets in all subjects!

Members, please log in to download this worksheet.

Not a member? Please sign up to gain complete access.

www.mathworksheets4kids.com