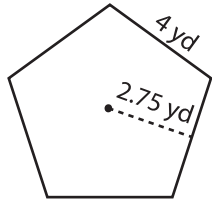


Area of a Polygon

Example:

Find the area of the polygon.



$$\text{Perimeter} = \text{number of sides} \times \text{side length}$$

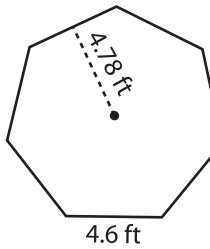
$$= 5 \times 4 = 20 \text{ yd}$$

$$\text{Area} = \frac{1}{2} \times \text{apothem} \times \text{perimeter}$$

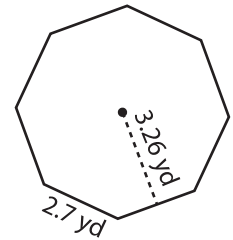
$$= \frac{1}{2} \times 2.75 \times 20 = \mathbf{27.5 \text{ yd}^2}$$

Find the area of each polygon using the given apothem. Round your answer to two decimal places.

1)

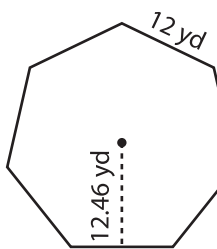


Area = _____

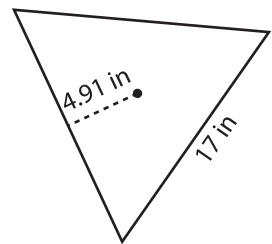


Area = _____

4)

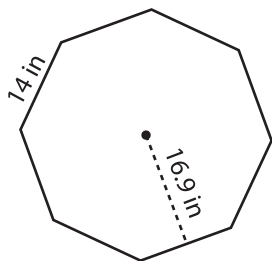


Area = _____



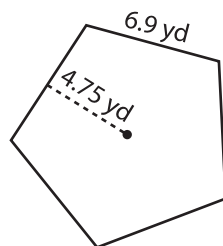
Area = _____

7)



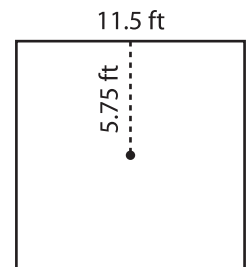
Area = _____

8)



Area = _____

9)



Area = _____

PREVIEW

Gain complete access to the largest collection of worksheets in all subjects!

Members, please log in to download this worksheet.

Not a member? Please sign up to gain complete access.

www.mathworksheets4kids.com