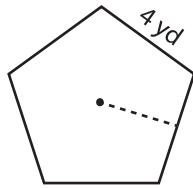


## Finding Apothem

**Example:**

Find the apothem of the polygon.



$$\text{Perimeter} = \text{number of sides} \times \text{side length}$$

$$= 5 \times 4 = \mathbf{20 \text{ yd}}$$

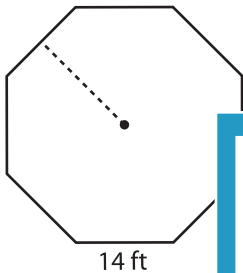
$$\text{Area} = 27.5 \text{ yd}^2$$

$$\text{Apothem} = \frac{2 \times \text{area}}{\text{perimeter}}$$

$$= \frac{2 \times 27.5}{20} = \mathbf{2.75 \text{ yd}}$$

Find the perimeter and apothem of each polygon. Round your answer to two decimal places.

1)

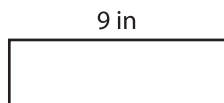


$$\text{Area} = 946.40 \text{ ft}^2$$

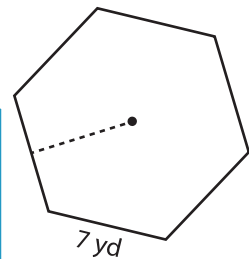
$$\text{Perimeter} = \underline{\hspace{2cm}}$$

$$\text{Apothem} = \underline{\hspace{2cm}}$$

2)



3)

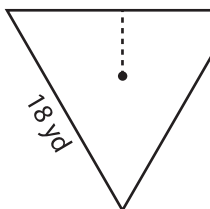


$$\text{Area} = 127.29 \text{ yd}^2$$

$$\text{Perimeter} = \underline{\hspace{2cm}}$$

$$\text{Apothem} = \underline{\hspace{2cm}}$$

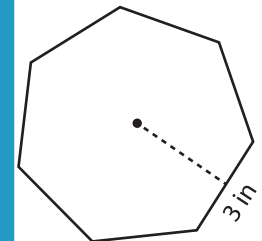
4)



$$\text{Area} = 140.29 \text{ yd}^2$$

$$\text{Perimeter} = \underline{\hspace{2cm}}$$

$$\text{Apothem} = \underline{\hspace{2cm}}$$

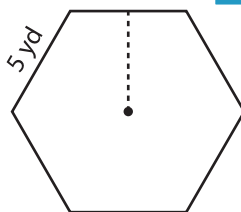


$$\text{Area} = 32.70 \text{ in}^2$$

$$\text{Perimeter} = \underline{\hspace{2cm}}$$

$$\text{Apothem} = \underline{\hspace{2cm}}$$

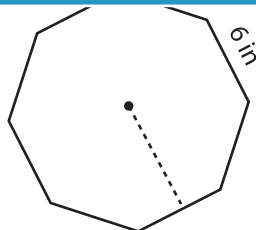
7)



$$\text{Area} = 64.95 \text{ yd}^2$$

$$\text{Perimeter} = \underline{\hspace{2cm}}$$

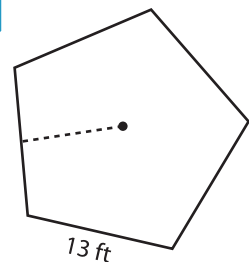
$$\text{Apothem} = \underline{\hspace{2cm}}$$



$$\text{Area} = 173.83 \text{ in}^2$$

$$\text{Perimeter} = \underline{\hspace{2cm}}$$

$$\text{Apothem} = \underline{\hspace{2cm}}$$



$$\text{Area} = 290.78 \text{ ft}^2$$

$$\text{Perimeter} = \underline{\hspace{2cm}}$$

$$\text{Apothem} = \underline{\hspace{2cm}}$$

# PREVIEW

Gain complete access to the largest collection of worksheets in all subjects!

Members, please log in to download this worksheet.

Not a member? Please sign up to gain complete access.

[www.mathworksheets4kids.com](http://www.mathworksheets4kids.com)