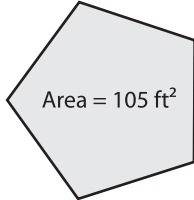


Finding Side length/Radius

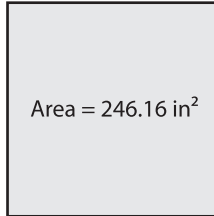
A) Find the radius of each polygon. Round your answer to the nearest tenth.

1)



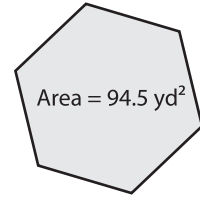
Radius = _____

2)



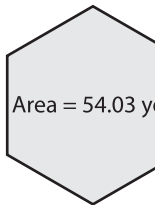
Radius = _____

3)

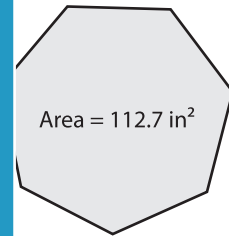


Radius = _____

4)



Radius = _____



radius = _____

B) Find the side length of each polygon. Round your answer to the nearest tenth.

1)



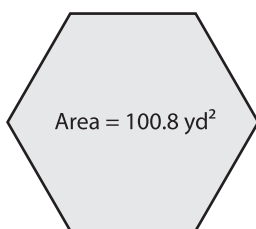
Side length = _____

st tenth.



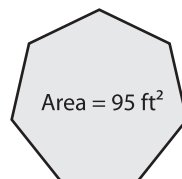
length = _____

4)



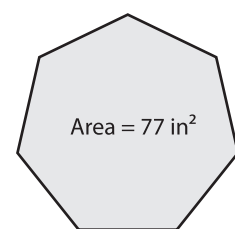
Side length = _____

5)



Side length = _____

6)



Side length = _____

PREVIEW

Gain complete access to the largest collection of worksheets in all subjects!

Members, please log in to download this worksheet.

Not a member? Please sign up to gain complete access.

www.mathworksheets4kids.com