


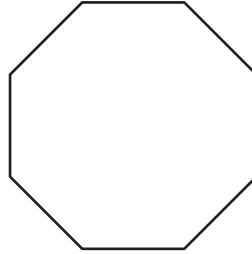
Simple & Complex Polygons

Classify each polygon as simple or complex.

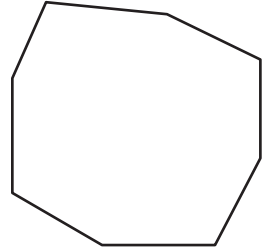
1)



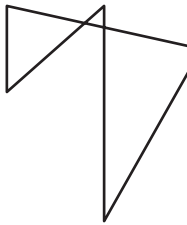
2)

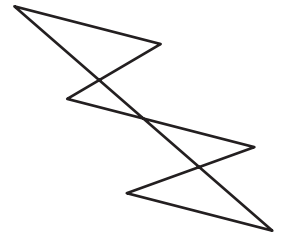


3)

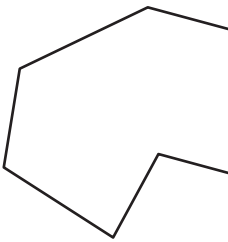


4)





7)



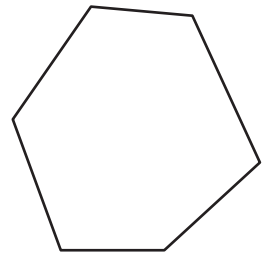
PREVIEW

Gain complete access to the largest collection of worksheets in all subjects!

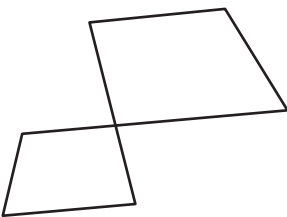
Members, please log in to download this worksheet.

Not a member? Please sign up to gain complete access.

www.mathworksheets4kids.com



10)



11)



12)

