

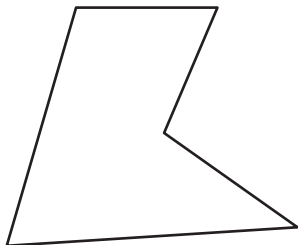
Name : \_\_\_\_\_

# Types of Polygons

Irregular-concave: S1

Write the number of sides and name each polygon.

1)



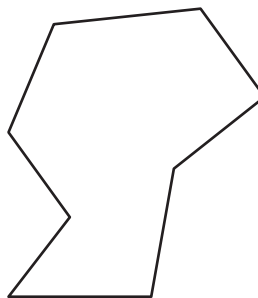
Number of sides

\_\_\_\_\_

Polygon type

\_\_\_\_\_

2)



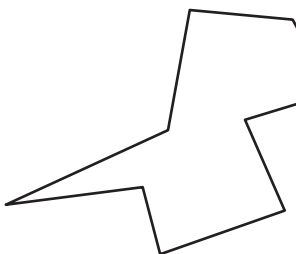
Number of sides

\_\_\_\_\_

Polygon type

\_\_\_\_\_

3)



Number of sides

\_\_\_\_\_

Polygon type

\_\_\_\_\_

4)

## PREVIEW

Gain complete access to the largest  
collection of worksheets in all subjects!

Members, please  
log in to  
download this  
worksheet.

Not a member?  
Please sign up to  
gain complete  
access.

[www.mathworksheets4kids.com](http://www.mathworksheets4kids.com)

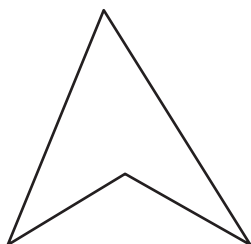
Number of sides

\_\_\_\_\_

Polygon type

\_\_\_\_\_

5)



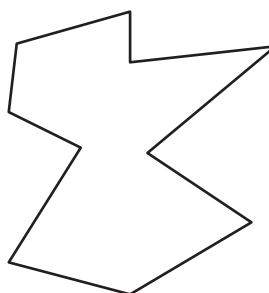
Number of sides

\_\_\_\_\_

Polygon type

\_\_\_\_\_

7)




Number of sides

\_\_\_\_\_

Polygon type

\_\_\_\_\_

9)



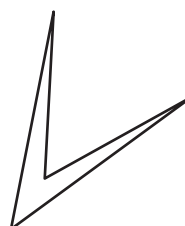
Number of sides

\_\_\_\_\_

Polygon type

\_\_\_\_\_

10)



Number of sides

\_\_\_\_\_

Polygon type

\_\_\_\_\_