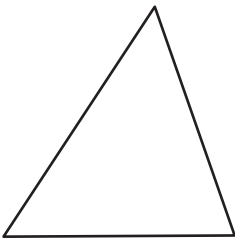


Name : \_\_\_\_\_

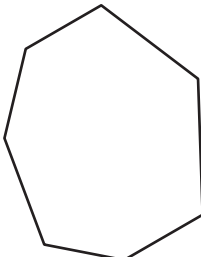
# Types of Polygons

Irregular-convex: S3

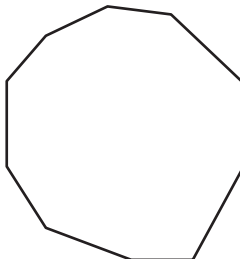
Write the number of sides and name each polygon.


1)  Number of sides  
\_\_\_\_\_

Polygon type  
\_\_\_\_\_

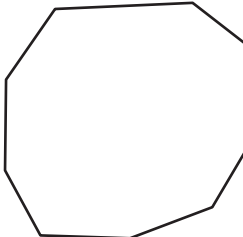
2)  Number of sides  
\_\_\_\_\_


Polygon type  
\_\_\_\_\_

3) 

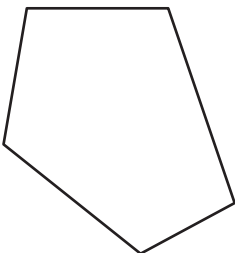
4)  Number of sides  
\_\_\_\_\_


Polygon type  
\_\_\_\_\_

5) 

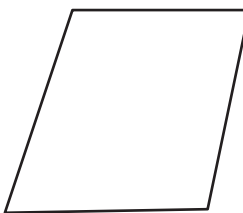
6)  Number of sides  
\_\_\_\_\_

Polygon type  
\_\_\_\_\_

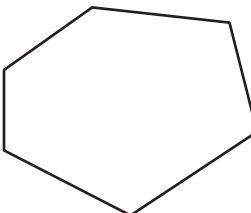
7) 

8)  Number of sides  
\_\_\_\_\_

Polygon type  
\_\_\_\_\_

9)  Number of sides  
\_\_\_\_\_

Polygon type  
\_\_\_\_\_

10)  Number of sides  
\_\_\_\_\_

Polygon type  
\_\_\_\_\_

**PREVIEW**

Gain complete access to the largest collection of worksheets in all subjects!

Members, please log in to download this worksheet.

Not a member? Please sign up to gain complete access.

[www.mathworksheets4kids.com](http://www.mathworksheets4kids.com)