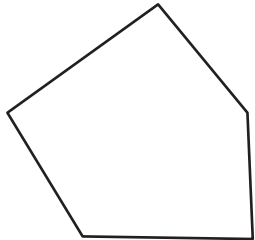


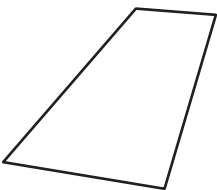
Name : _____

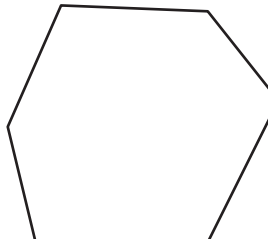
Types of Polygons


Irregular-convex: S4

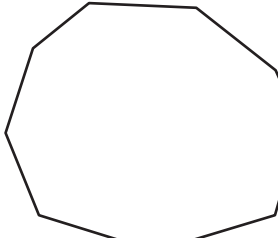
Write the number of sides and name each polygon.


1)  Number of sides _____
Polygon type _____

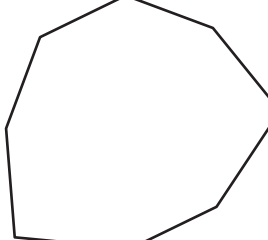
2)  Number of sides _____
Polygon type _____


3) 

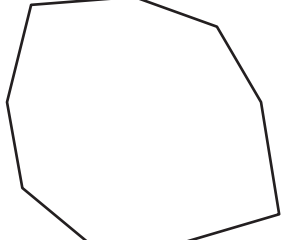
4)  Number of sides _____
Polygon type _____

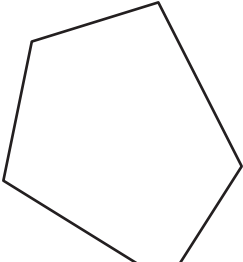
5) 

6)  Number of sides _____
Polygon type _____

7) 

8)  Number of sides _____
Polygon type _____

9)  Number of sides _____
Polygon type _____

10)  Number of sides _____
Polygon type _____

PREVIEW

Gain complete access to the largest collection of worksheets in all subjects!

Members, please log in to download this worksheet.

Not a member? Please sign up to gain complete access.

www.mathworksheets4kids.com