

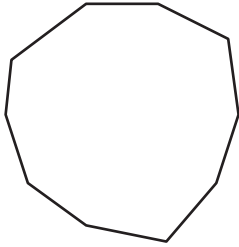
Name : _____

Types of Polygons

Irregular-convex: S5

Write the number of sides and name each polygon.

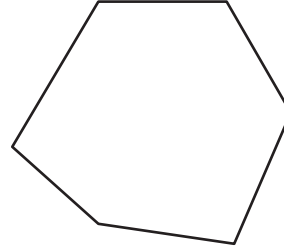
1)



Number of sides

Polygon type

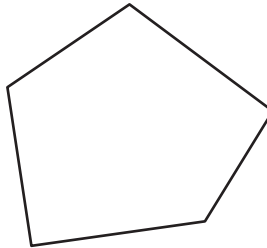
2)



Number of sides

Polygon type

3)



Number of sides

Polygon type

4)



Number of sides

Polygon type

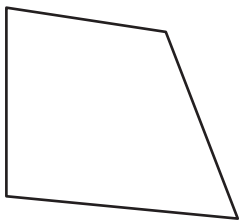
5)



Number of sides

Polygon type

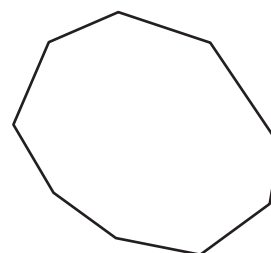
7)



Number of sides

Polygon type

10)



Number of sides

Polygon type

PREVIEW

Gain complete access to the largest collection of worksheets in all subjects!

Members, please log in to download this worksheet.

Not a member? Please sign up to gain complete access.

www.mathworksheets4kids.com