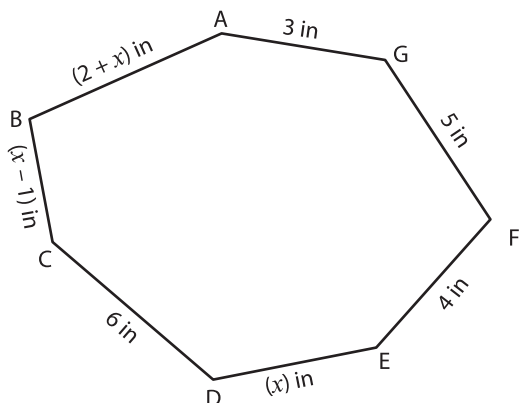


Polygon - Unknown Sides

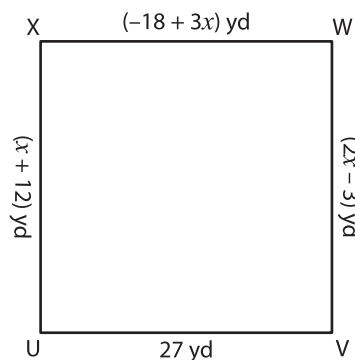
Find the value of x and the indicated side lengths.

1)



Perimeter = 28 in ; $x =$ _____

2)

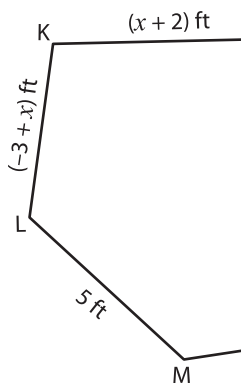


Perimeter = 108 yd ; $x =$ _____

AB = _____ ; BC = _____


_____ ; UX = _____

3)



Perimeter = 33 ft ;

JK = _____ ; KL = _____



_____ ; $x =$ _____

_____ ; ST = _____

PREVIEW

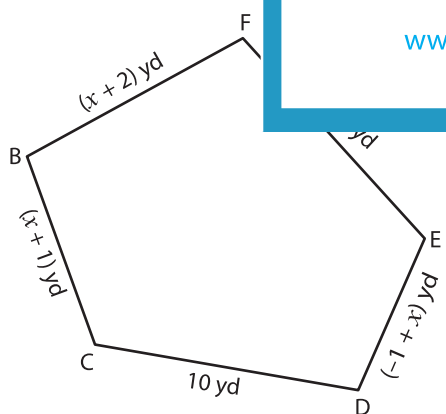
Gain complete access to the largest
collection of worksheets in all subjects!

Members, please
log in to
download this
worksheet.

Not a member?
Please sign up to
gain complete
access.

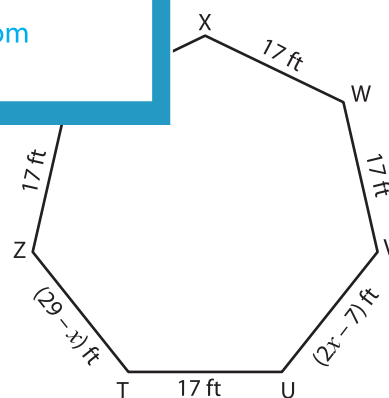
www.mathworksheets4kids.com

5)



Perimeter = 44 yd ; $x =$ _____

BF = _____ ; BC = _____ ; DE = _____



Perimeter = 119 ft ; $x =$ _____

TZ = _____ ; UV = _____ ; XY = _____