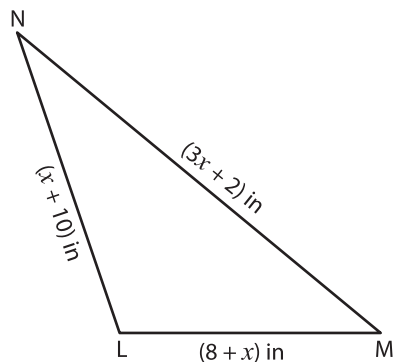


Polygon - Unknown Sides

Find the value of x and the indicated side lengths.

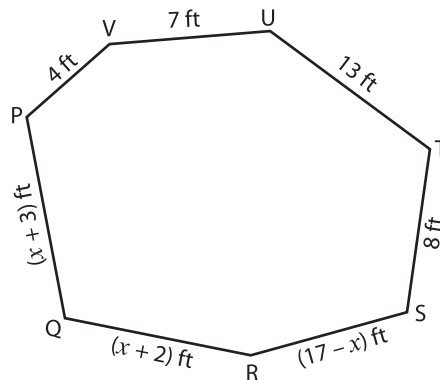
1)



Perimeter = 50 in ; $x =$ _____

LM = _____ ; MN = _____

2)



Perimeter = 63 ft ; $x =$ _____

_____ ; RS = _____

PREVIEW

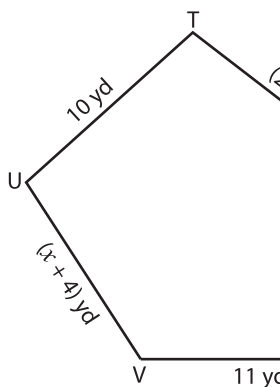
Gain complete access to the largest
collection of worksheets in all subjects!

Members, please
log in to
download this
worksheet.

Not a member?
Please sign up to
gain complete
access.

www.mathworksheets4kids.com

3)



Perimeter = 48 yd

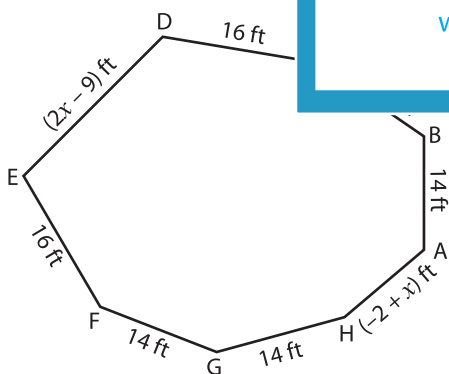
UV = _____ ; WX = _____



_____ ; $x =$ _____

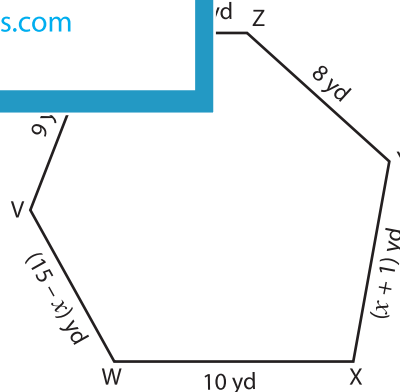
_____ ; UR = _____

5)



Perimeter = 109 ft ; $x =$ _____

HA = _____ ; BC = _____ ; DE = _____



Perimeter = 49 yd ; $x =$ _____

XY = _____ ; ZU = _____ ; VW = _____