


Name : _____

Perimeter of a Polygon

Find the perimeter of each regular polygon.

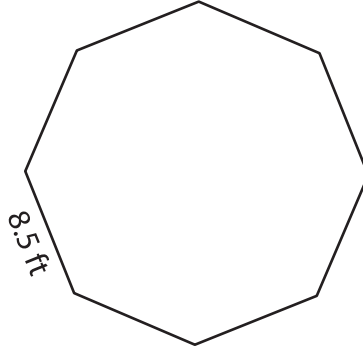
1)



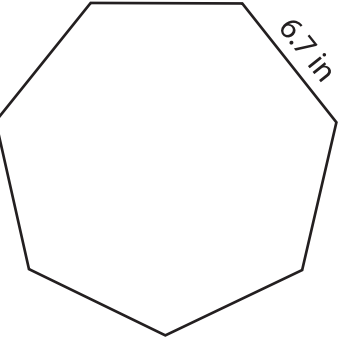
14.8 yd

Perimeter =

2)



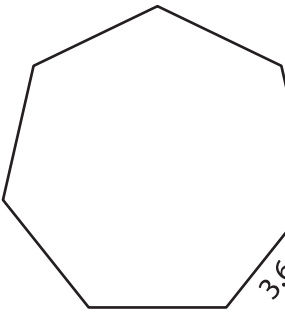
8.5 ft



6.7 in

Perimeter =

4)



3.6

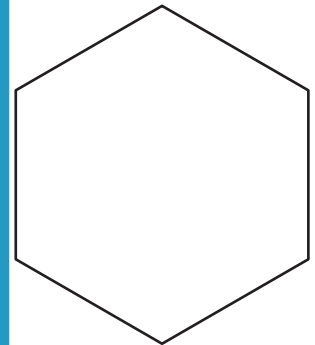
Perimeter =

PREVIEW
Gain complete access to the largest collection of worksheets in all subjects!

Members, please log in to download this worksheet.

Not a member? Please sign up to gain complete access.

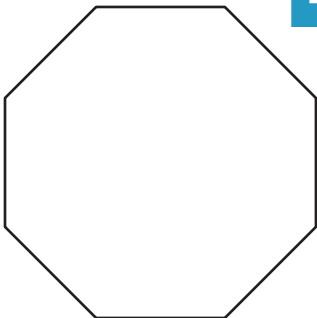
www.mathworksheets4kids.com



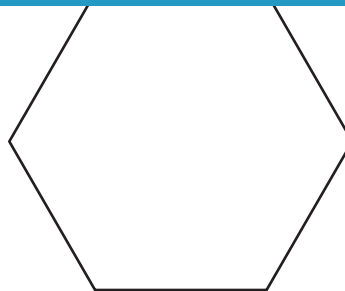
Perimeter =

7)

4.9 ft

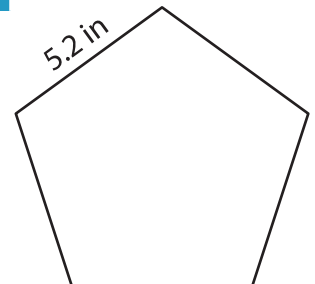


Perimeter =



2.1 yd

Perimeter =



5.2 in

Perimeter =