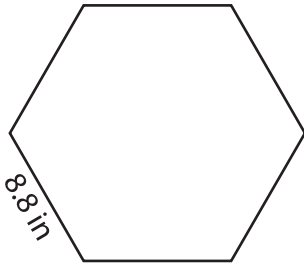


Perimeter of a Polygon

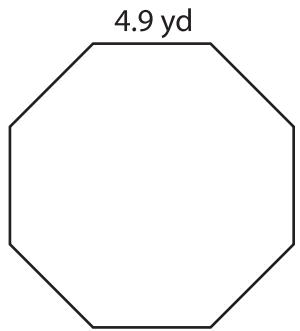
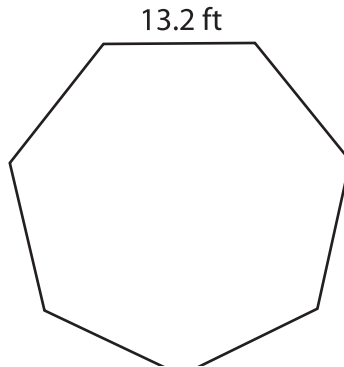
Find the perimeter of each regular polygon.

1)

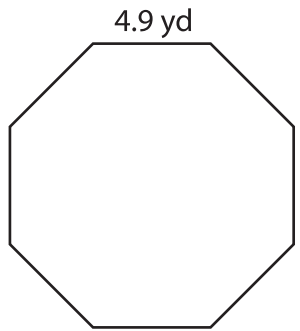


Perimeter =

2)

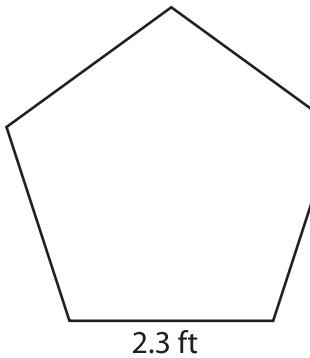


3)

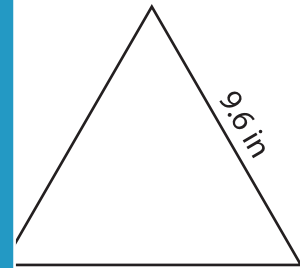


Perimeter =

4)

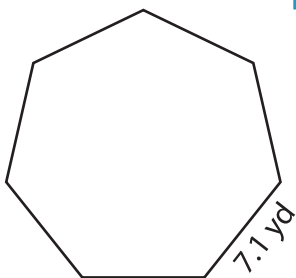


Perimeter =

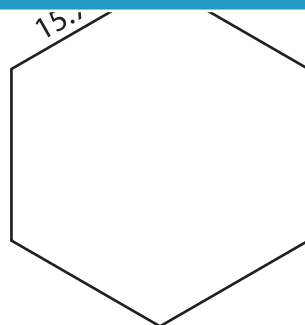


Perimeter =

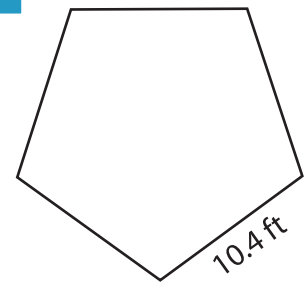
7)



Perimeter =



Perimeter =



Perimeter =

PREVIEW

Gain complete access to the largest collection of worksheets in all subjects!

Members, please log in to download this worksheet.

Not a member? Please sign up to gain complete access.

www.mathworksheets4kids.com