

Name : _____

Perimeter of a Polygon

A) Find the perimeter of each regular polygon.

1) Side length = 10 in, Number of sides = 7

Perimeter = _____

2) Side length = 4 ft, Number of sides = 6

Perimeter = _____

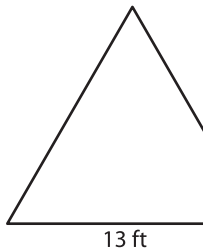
3) Side length = 12 yd, Number of sides = 5

Perimeter = _____

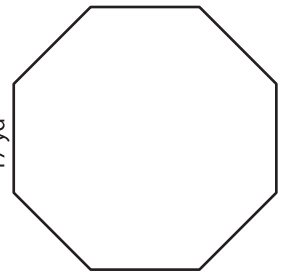
4) Side length = 9 in, Number of sides = 4

Perimeter = _____

5)



Perimeter = _____



Perimeter = _____

PREVIEW

Gain complete access to the largest collection of worksheets in all subjects!

Members, please log in to download this worksheet.

Not a member? Please sign up to gain complete access.

www.mathworksheets4kids.com

B) Find the perimeter

8) 4 ft, 12 ft, 7 ft, 16

Perimeter = _____

e lengths.

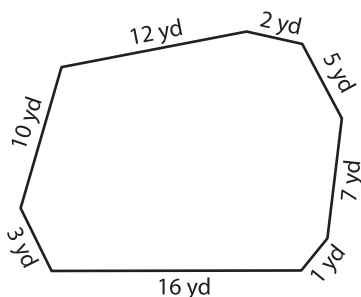
6 yd, 18 yd, 14 yd, 8 yd, 2 yd

10) 9 yd, 3 yd, 1 yd, 2

Perimeter = _____

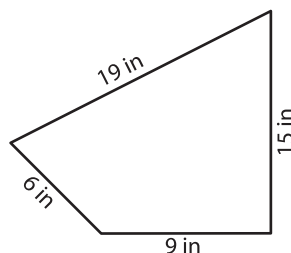
20 in

12)



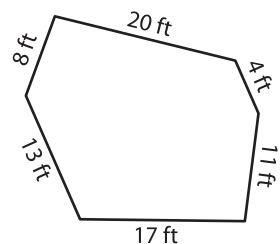
Perimeter = _____

13)



Perimeter = _____

14)



Perimeter = _____