

Name : _____

Perimeter of a Polygon

A) Find the perimeter of each regular polygon.

1) Side length = 58 ft, Number of sides = 6

Perimeter = _____

2) Side length = 17 in, Number of sides = 3

Perimeter = _____

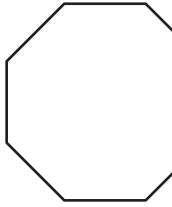
3) Side length = 32 yd, Number of sides = 4

Perimeter = _____

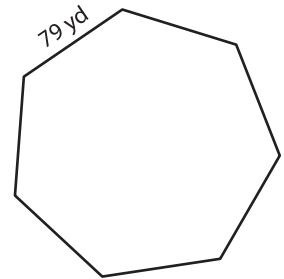
4) Side length = 67 yd, Number of sides = 5

Perimeter = _____

5)



Perimeter = _____



Perimeter = _____

PREVIEW

Gain complete access to the largest collection of worksheets in all subjects!

Members, please log in to download this worksheet.

Not a member? Please sign up to gain complete access.

www.mathworksheets4kids.com

B) Find the perimeter

8) 16 in, 25 in, 32 in

Perimeter = _____

the lengths.

16 in, 69 yd, 84 yd, 95 yd

Perimeter = _____

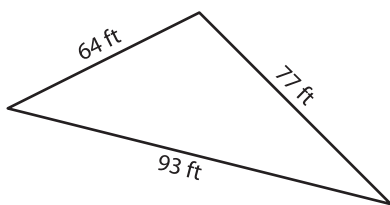
10) 41 yd, 18 yd, 33 yd

Perimeter = _____

10 ft, 55 ft

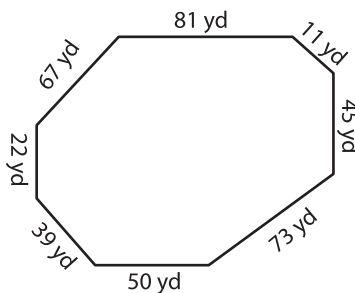
Perimeter = _____

12)



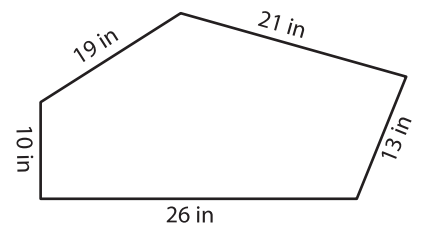
Perimeter = _____

13)



Perimeter = _____

14)



Perimeter = _____