

Name : _____

Perimeter of a Polygon

A) Find the perimeter of each regular polygon.

1) Side length = 82 yd, Number of sides = 3

Perimeter = _____

2) Side length = 21 in, Number of sides = 8

Perimeter = _____

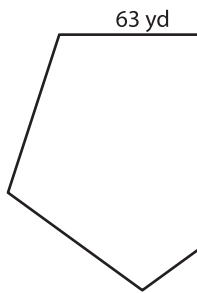
3) Side length = 19 in, Number of sides = 5

Perimeter = _____


4) Side length = 54 ft, Number of sides = 7

Perimeter = _____

5)



Perimeter = _____



Perimeter = _____

B) Find the perimeter of each irregular polygon.

8) 99 yd, 85 yd, 95 yd

Perimeter = _____

10) 25 in, 16 in, 44 in

Perimeter = _____

PREVIEW

Gain complete access to the largest collection of worksheets in all subjects!

Members, please log in to download this worksheet.

Not a member? Please sign up to gain complete access.

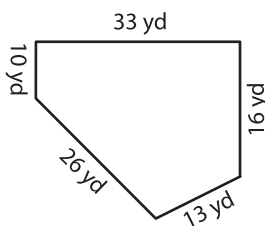
www.mathworksheets4kids.com

Find the lengths.

7 ft

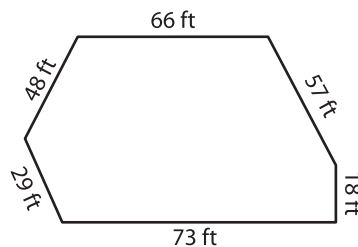
5 ft, 27 ft, 14 ft

12)



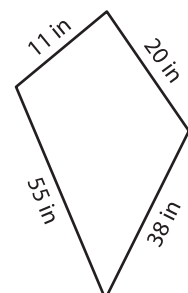
Perimeter = _____

13)



Perimeter = _____

14)



Perimeter = _____