

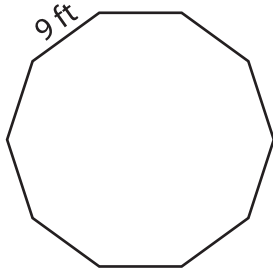
Name : _____

Perimeter of a Polygon

Sheet 2

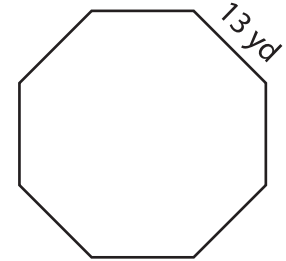
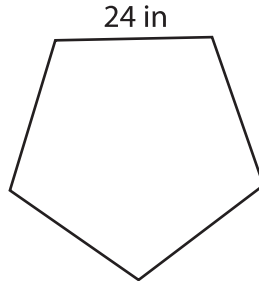
Find the perimeter of each regular polygon.

1)



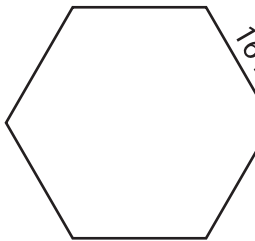
Perimeter =

2)



Perimeter =

4)



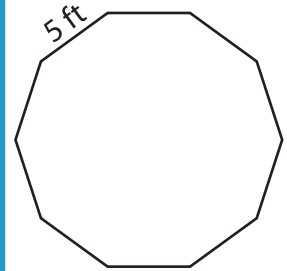
Perimeter =

PREVIEW
Gain complete access to the largest collection of worksheets in all subjects!

Members, please log in to download this worksheet.

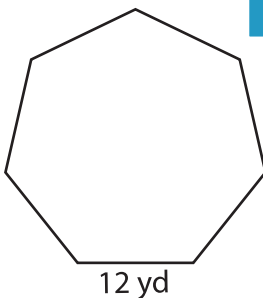
Not a member? Please sign up to gain complete access.

www.mathworksheets4kids.com

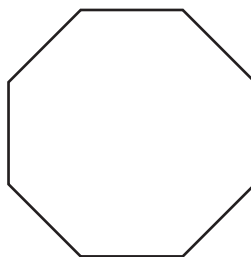


Perimeter =

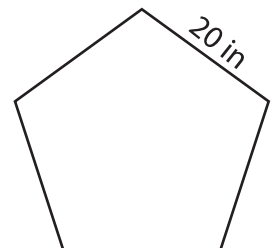
7)



Perimeter =



Perimeter =



Perimeter =