


Name : \_\_\_\_\_

# Polygon - Side Length

Find the side length of each regular polygon.

1)

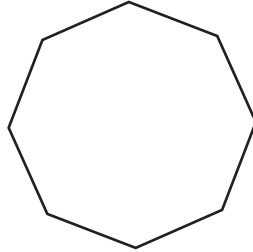


Perimeter = \_\_\_\_\_

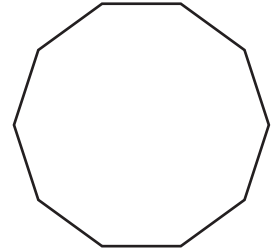
Number of sides = \_\_\_\_\_

Length of each side = \_\_\_\_\_

2)



3)

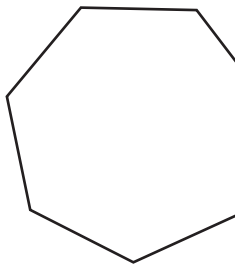


Perimeter = 20 ft

Number of sides = \_\_\_\_\_

Length of each side = \_\_\_\_\_

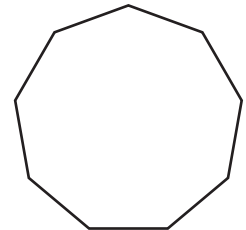
4)



Perimeter = \_\_\_\_\_

Number of sides = \_\_\_\_\_

Length of each side = \_\_\_\_\_

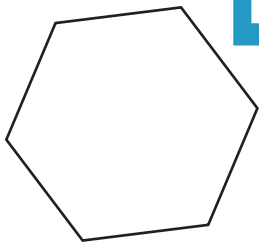


Perimeter = 54 yd

Number of sides = \_\_\_\_\_

Length of each side = \_\_\_\_\_

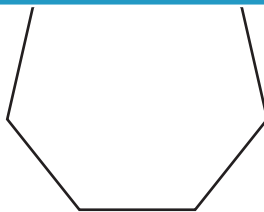
7)



Perimeter = 48 yd

Number of sides = \_\_\_\_\_

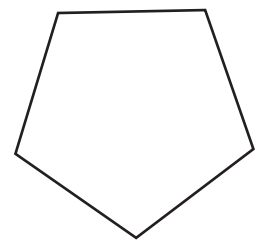
Length of each side = \_\_\_\_\_



Perimeter = 63 ft

Number of sides = \_\_\_\_\_

Length of each side = \_\_\_\_\_



Perimeter = 75 in

Number of sides = \_\_\_\_\_

Length of each side = \_\_\_\_\_

**PREVIEW**

Gain complete access to the largest collection of worksheets in all subjects!

Members, please log in to download this worksheet.

Not a member? Please sign up to gain complete access.

[www.mathworksheets4kids.com](http://www.mathworksheets4kids.com)