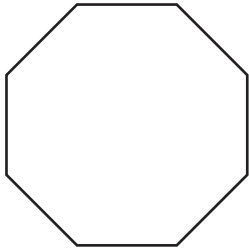


Polygon - Side Length

Find the side length of each regular polygon.

1)

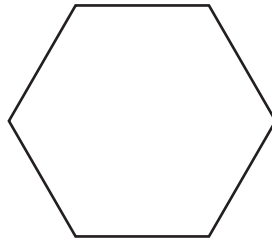


Perimeter = _____

Number of sides = _____

Length of each side = _____

2)

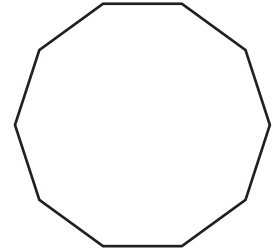


Perimeter = 78 in

Number of sides = _____

Length of each side = _____

3)

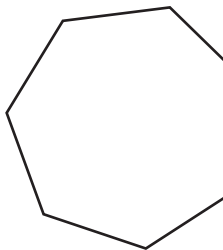


Perimeter = 40 yd

Number of sides = _____

Length of each side = _____

4)



Perimeter = _____

Number of sides = _____

Length of each side = _____

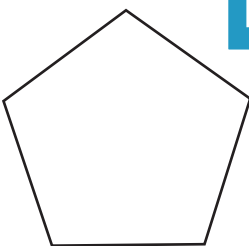


Perimeter = 32 in

Number of sides = _____

Length of each side = _____

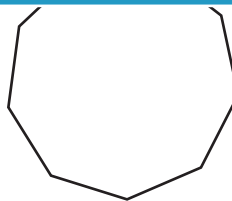
7)



Perimeter = 65 in

Number of sides = _____

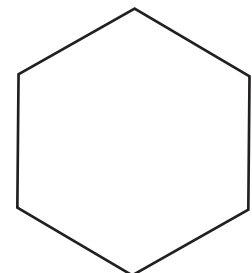
Length of each side = _____



Perimeter = 135 yd

Number of sides = _____

Length of each side = _____



Perimeter = 96 ft

Number of sides = _____

Length of each side = _____

PREVIEW

Gain complete access to the largest collection of worksheets in all subjects!

Members, please log in to download this worksheet.

Not a member? Please sign up to gain complete access.

www.mathworksheets4kids.com