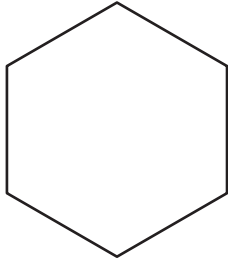


Name : _____

Polygon - Side Length

Find the side length of each regular polygon. Round your answer to the nearest tenth.

1)

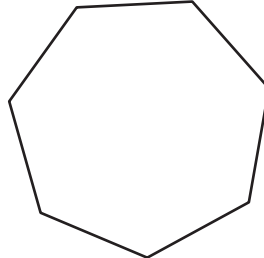


Perimeter = 73

Number of sides = _____

Length of each side = _____

2)

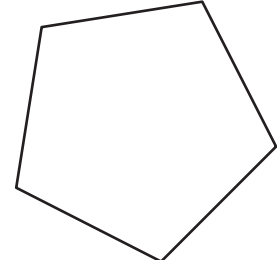


Perimeter = 56.5 ft

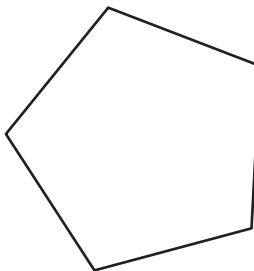
Number of sides = _____

Length of each side = _____

3)




4)



Perimeter = 3

Number of sides = _____

Length of each side = _____

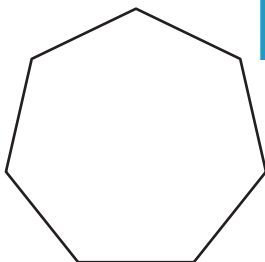


Perimeter = 47.1 in

Number of sides = _____

Length of each side = _____


7)



Perimeter = 97.4 ft

Number of sides = _____

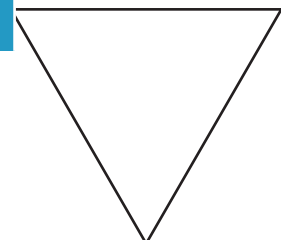
Length of each side = _____



Perimeter = 68.7 yd

Number of sides = _____

Length of each side = _____



Perimeter = 21.8 in

Number of sides = _____

Length of each side = _____

PREVIEW

Gain complete access to the largest collection of worksheets in all subjects!

Members, please log in to download this worksheet.

Not a member? Please sign up to gain complete access.

www.mathworksheets4kids.com