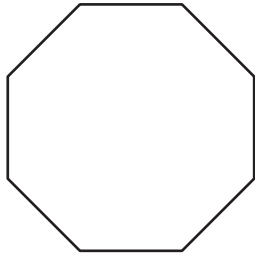


Name : _____

Polygon - Side Length

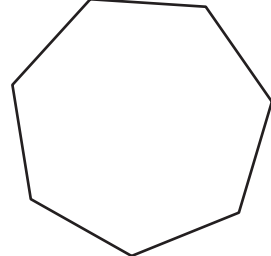
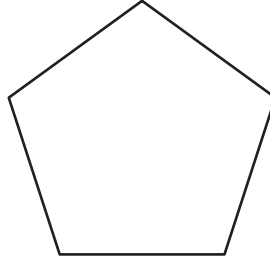
Find the side length of each regular polygon. Round your answer to the nearest tenth.

1)



Perimeter = 52
Number of sides = _____
Length of each side = _____

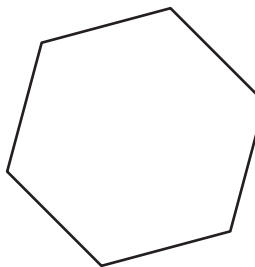
2)




3)

Perimeter = 91.7 in
Number of sides = _____
Length of each side = _____

4)




Perimeter = 12
Number of sides = _____
Length of each side = _____

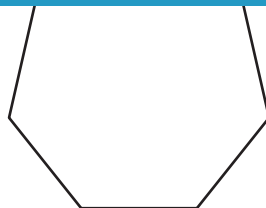


Perimeter = 86.3 yd
Number of sides = _____
Length of each side = _____

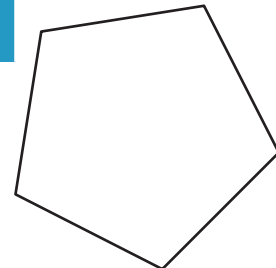
7)



Perimeter = 69 in
Number of sides = _____
Length of each side = _____



Perimeter = 24.1 yd
Number of sides = _____
Length of each side = _____



Perimeter = 30.6 ft
Number of sides = _____
Length of each side = _____

PREVIEW

Gain complete access to the largest collection of worksheets in all subjects!

Members, please log in to download this worksheet.

Not a member? Please sign up to gain complete access.

www.mathworksheets4kids.com