

Name : _____

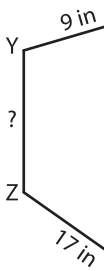
Perimeter of a Polygon

A) Find the side length of each regular polygon.

S.No	Perimeter	Number of sides	Side length
1.	45 ft	3	
2.	20 yd	5	
3.	54 in	6	
4.	14 yd	7	

B) Find the side length:

5)



Perimeter = 65

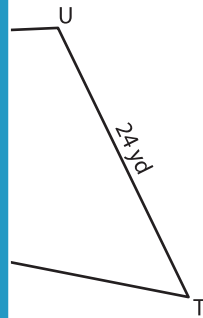
PREVIEW

Gain complete access to the largest collection of worksheets in all subjects!

Members, please log in to download this worksheet.

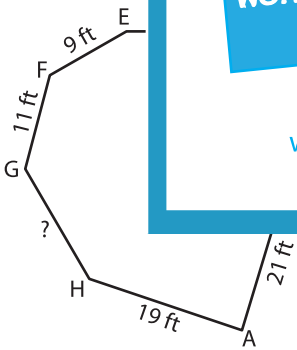
Not a member? Please sign up to gain complete access.

www.mathworksheets4kids.com



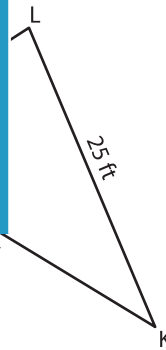
; ST = _____

7)



Perimeter = 97 ft ; GH = _____

Perimeter = 76 ft ; LM = _____



9) Find the side length of the regular octagon whose perimeter is 32 feet.
