

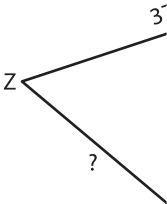
Perimeter of a Polygon

A) Find the side length of each regular polygon.

S.No	Perimeter	Number of sides	Side length
1.	48 in	8	
2.	33 ft	3	
3.	15 yd	5	
4.	60 ft	6	

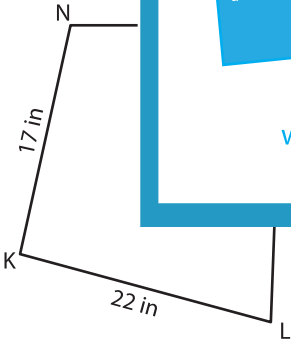
B) Find the side length of each polygon.

5)

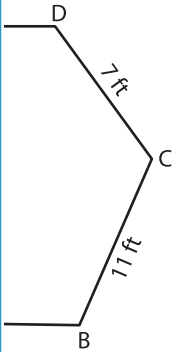


Perimeter = 92 yd

7)



Perimeter = 79 in ; LM = _____



DE = _____



Perimeter = 80 yd ; UV = _____

9) A quadrilateral has a perimeter of 85 inches. If the three sides of the quadrilateral measure 25 inches, 39 inches and 14 inches, what is the length of the other side?
