

Name : \_\_\_\_\_

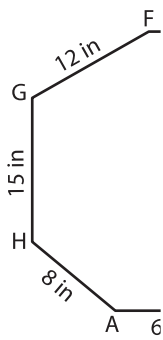
## Perimeter of a Polygon

A) Find the side length of each regular polygon.

S.No	Perimeter	Number of sides	Side length
1.	12 yd	6	
2.	42 ft	7	
3.	51 in	3	
4.	28 ft	4	

B) Find the side length

5)



Perimeter = 76

# PREVIEW

Gain complete access to the largest collection of worksheets in all subjects!

Members, please log in to download this worksheet.

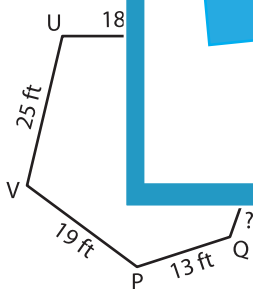
Not a member? Please sign up to gain complete access.

[www.mathworksheets4kids.com](http://www.mathworksheets4kids.com)

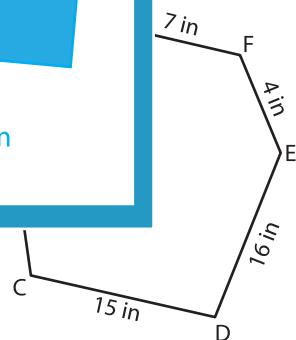


XW = \_\_\_\_\_

7)



Perimeter = 97 ft ; QR = \_\_\_\_\_



Perimeter = 63 in ; CH = \_\_\_\_\_

9) Determine the side length of the regular hexagon whose perimeter is 30 yards.

\_\_\_\_\_