

Name : _____

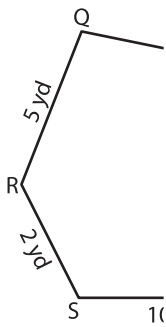
Perimeter of a Polygon

A) Find the side length of each regular polygon.

S.No	Perimeter	Number of sides	Side length
1.	70 ft	7	
2.	56 in	8	
3.	24 in	4	
4.	15 yd	3	

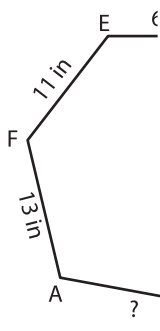
B) Find the side length of

5)

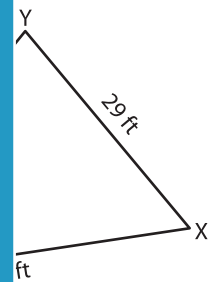


Perimeter = 49 yd

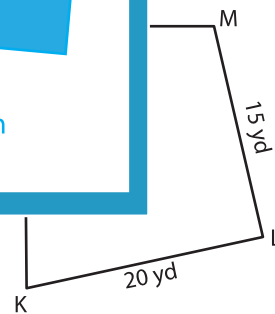
7)



Perimeter = 87 in ; AB = _____



Side YZ = _____



Perimeter = 68 yd ; MN = _____

9) The perimeter of a regular heptagon is 84 feet. Find its side length.

PREVIEW

Gain complete access to the largest collection of worksheets in all subjects!

Members, please log in to download this worksheet.

Not a member? Please sign up to gain complete access.

www.mathworksheets4kids.com