

Name : _____

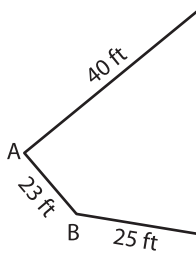
Perimeter of a Polygon

A) Find the side length of each regular polygon.

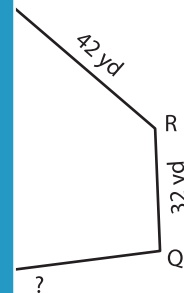
S.No	Perimeter	Number of sides	Side length
1.	228 in	6	
2.	186 ft	3	
3.	360 yd	8	
4.	119 ft	7	

B) Find the side length

5)

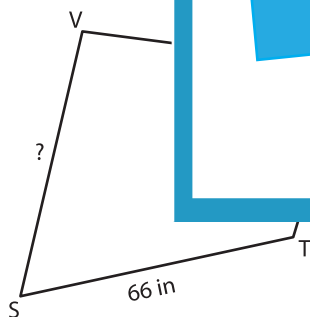


Perimeter = 175

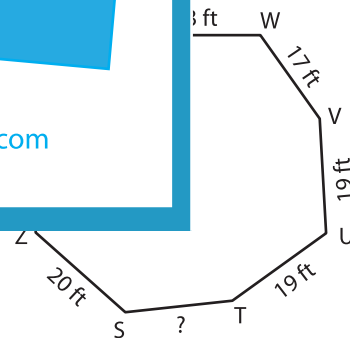


; PQ = _____

7)



Perimeter = 259 in ; SV = _____



Perimeter = 156 ft ; ST = _____

9) A triangle has a perimeter of 206 inches. If the two sides of the triangle measure 59 inches and 94 inches, determine the length of other side.

PREVIEW

Gain complete access to the largest collection of worksheets in all subjects!

Members, please log in to download this worksheet.

Not a member? Please sign up to gain complete access.

www.mathworksheets4kids.com