

Name : \_\_\_\_\_

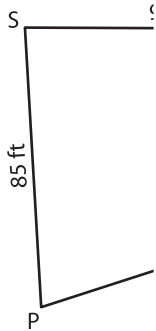
## Perimeter of a Polygon

A) Find the side length of each regular polygon.

S.No	Perimeter	Number of sides	Side length
1.	140 ft	4	
2.	258 yd	6	
3.	108 in	3	
4.	231 yd	7	

B) Find the side length of the polygon.

5)



Perimeter = 312

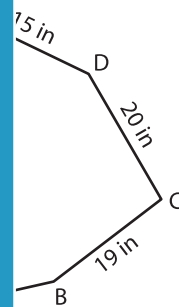
# PREVIEW

Gain complete access to the largest collection of worksheets in all subjects!

Members, please log in to download this worksheet.

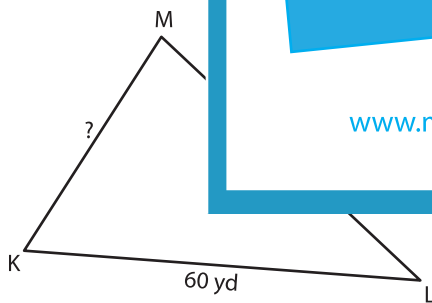
Not a member? Please sign up to gain complete access.

[www.mathworksheets4kids.com](http://www.mathworksheets4kids.com)

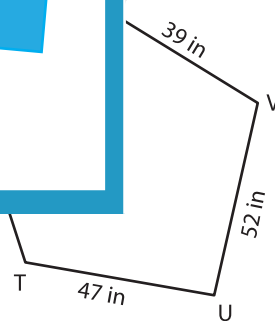


AB = \_\_\_\_\_

7)



Perimeter = 162 yd ; KM = \_\_\_\_\_



Perimeter = 220 in ; WX = \_\_\_\_\_

9) Find the side length of the regular octagon whose perimeter is 120 feet.

\_\_\_\_\_