

Name : \_\_\_\_\_

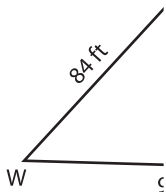
## Perimeter of a Polygon

A) Find the side length of each regular polygon.

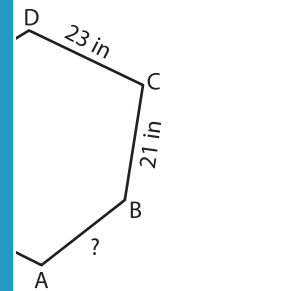
S.No	Perimeter	Number of sides	Side length
1.	185 yd	5	
2.	264 in	8	
3.	348 ft	4	
4.	287 yd	7	

B) Find the side length of the polygon.

5)

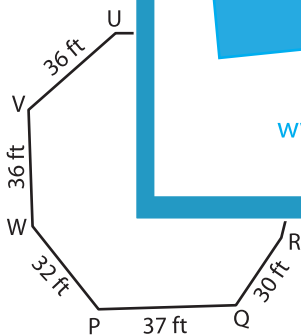


Perimeter = 301

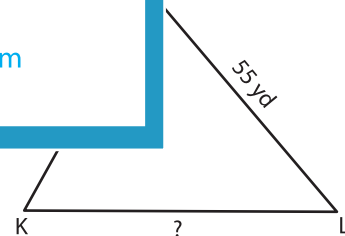


; AB = \_\_\_\_\_

7)



Perimeter = 272 ft ; ST = \_\_\_\_\_



Perimeter = 162 yd ; KL = \_\_\_\_\_

9) Find the side length of the square whose perimeter is 156 inches.

\_\_\_\_\_

# PREVIEW

Gain complete access to the largest collection of worksheets in all subjects!

Members, please log in to download this worksheet.

Not a member? Please sign up to gain complete access.

[www.mathworksheets4kids.com](http://www.mathworksheets4kids.com)