

Name : _____

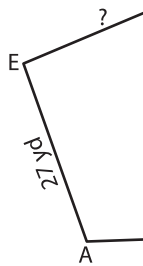
Perimeter of a Polygon

A) Find the side length of each regular polygon.

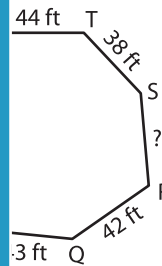
S.No	Perimeter	Number of sides	Side length
1.	350 in	7	
2.	135 ft	3	
3.	240 yd	6	
4.	160 ft	5	

B) Find the side length of

5)

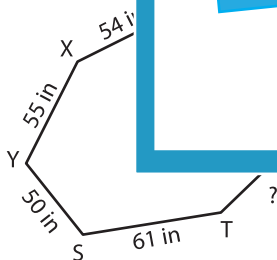


Perimeter = 126 yd

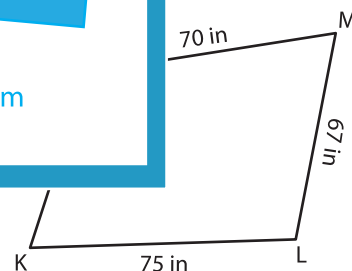


; RS = _____

7)



Perimeter = 376 in ; TU = _____



Perimeter = 273 in ; KN = _____

9) Determine the side length of the regular hexagon, if its perimeter is 186 feet.

PREVIEW

Gain complete access to the largest collection of worksheets in all subjects!

Members, please log in to download this worksheet.

Not a member? Please sign up to gain complete access.

www.mathworksheets4kids.com