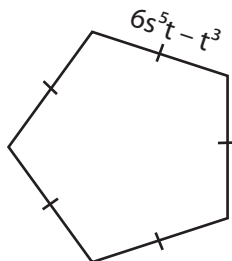


Name : _____

Adding Polynomials - Perimeter

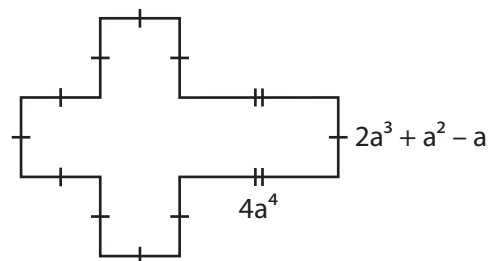
Find the perimeter of each polygon.

1)



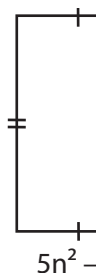
perimeter = _____

2)

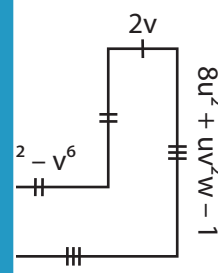


perimeter = _____

3)



perimeter = _____



$2 - v^6$

$8u^2 + uv^2w - 1$

PREVIEW

Gain complete access to the largest collection of worksheets in all subjects!

Members, please log in to download this worksheet.

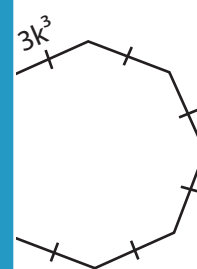
Not a member? Please sign up to gain complete access.

www.mathworksheets4kids.com

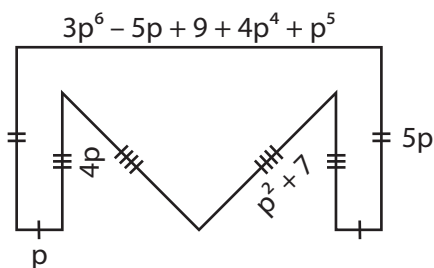
5)



perimeter = _____

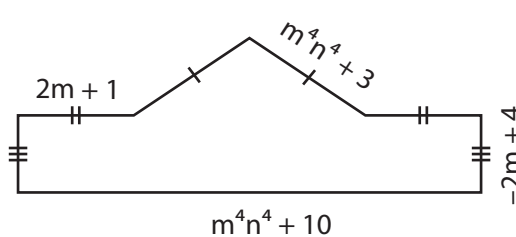


7)



perimeter = _____

8)



perimeter = _____