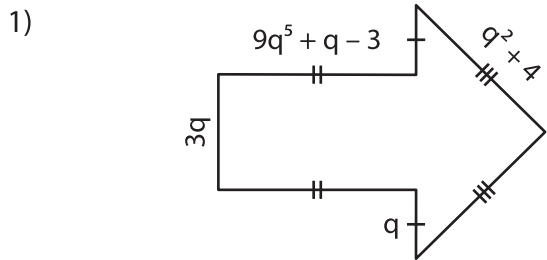


Name : \_\_\_\_\_

## Adding Polynomials - Perimeter

Sheet 3

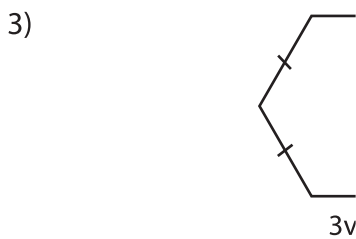
Find the perimeter of each polygon.



2)

perimeter = \_\_\_\_\_

perimeter = \_\_\_\_\_



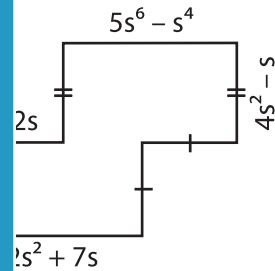
# PREVIEW

Gain complete access to the largest collection of worksheets in all subjects!

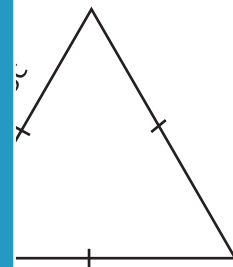
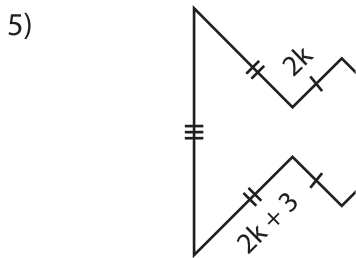
Members, please log in to download this worksheet.

Not a member? Please sign up to gain complete access.

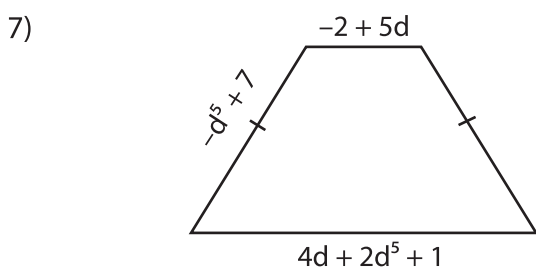
www.mathworksheets4kids.com



perimeter = \_\_\_\_\_



perimeter = \_\_\_\_\_



8)

perimeter = \_\_\_\_\_

perimeter = \_\_\_\_\_