


Name : \_\_\_\_\_

# Left, Right, and Middle

1) Which 3D shape is on the right?




cube

cylinder

cone

2) Which 3D shape is



sphere

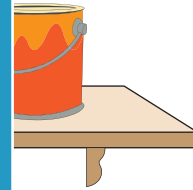
**PREVIEW**

Gain complete access to the largest collection of worksheets in all subjects!

Members, please log in to download this worksheet.

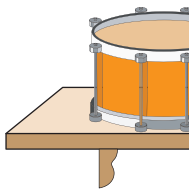
Not a member? Please sign up to gain complete access.

[www.mathworksheets4kids.com](http://www.mathworksheets4kids.com)

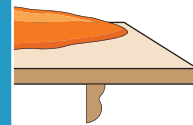


cylinder

3) Which 3D shape is

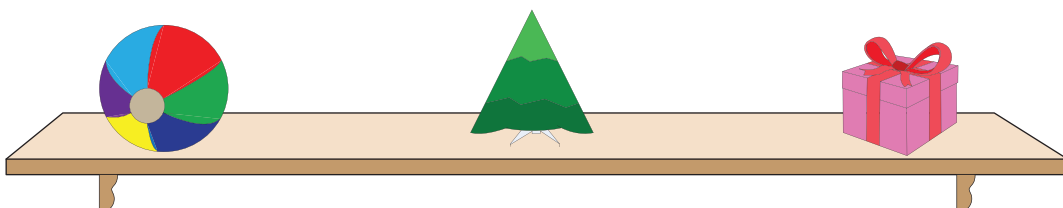


cube



cone

4) Which 3D shape is on the right?



cone

cube

sphere