




Name : _____

Left, Right, and Middle


Look at the objects, identify their positions, and answer the questions.

1)

 nurse	 teacher	 traffic police
--	--	---

- Who is on the right?
- traffic police
 - teacher
 - nurse

2)

 tiger	
---	--

PREVIEW

Gain complete access to the largest collection of worksheets in all subjects!


Members, please log in to download this worksheet.

Not a member? Please sign up to gain complete access.


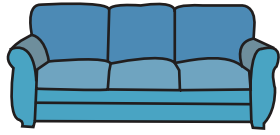

www.mathworksheets4kids.com

- Which animal is in the middle?
- tiger
 - lion
 - cheetah
- Which flower is on the left?
- rose
 - tulip
 - daisy

3)

 daisy	
--	--

4)

 chair	 couch	 table
--	--	--

- Which piece of furniture is on the left?
- table
 - chair
 - couch