


Name: _____


Top, Middle, and Bottom

1) Where is the oval ?



a) top b) middle

2) Where is the octagon ?



middle c) bottom

3) Where is the rectangle ?




a) top b) middle

pentagon ?

middle c) bottom

5) Where is the hexagon ?



a) top b) middle c) bottom

circle ?

a) top b) middle c) bottom

PREVIEW

Gain complete access to the largest collection of worksheets in all subjects!

Members, please log in to download this worksheet.

Not a member? Please sign up to gain complete access.

www.mathworksheets4kids.com