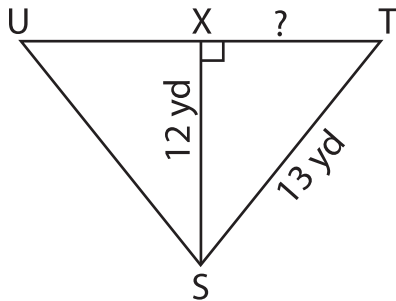


Pythagorean Theorem - Shapes

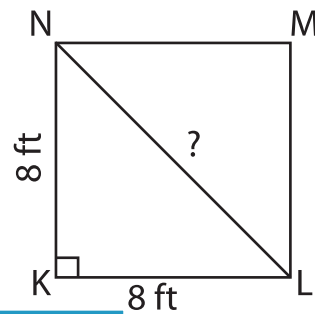
Use the Pythagorean theorem. Find the length of the unknown side in each figure. Round the answer to the nearest tenth.

1)

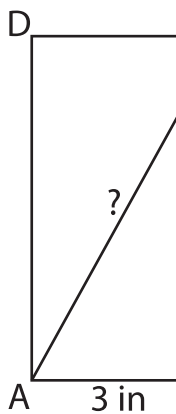


TX = _____

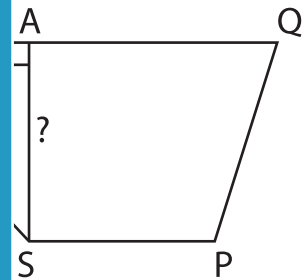
2)



3)



AC = _____



PREVIEW

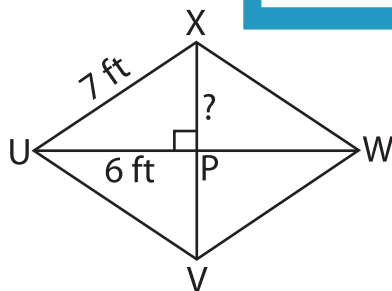
Gain complete access to the largest collection of worksheets in all subjects!

Members, please log in to download this worksheet.

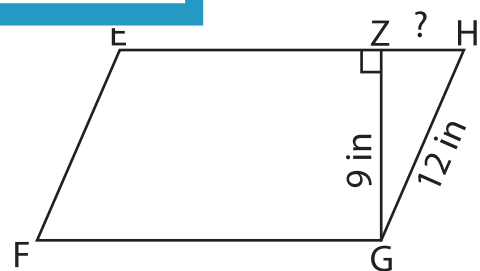
Not a member? Please sign up to gain complete access.

www.mathworksheets4kids.com

5)



XP = _____



ZH = _____