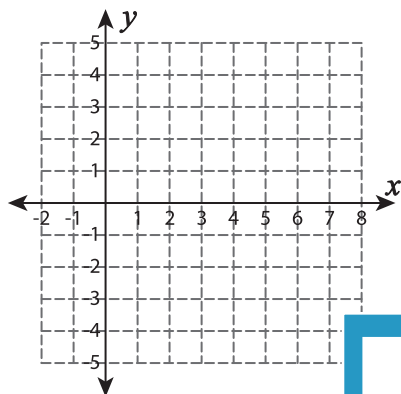


Function Table

Complete the function table and sketch the graph.

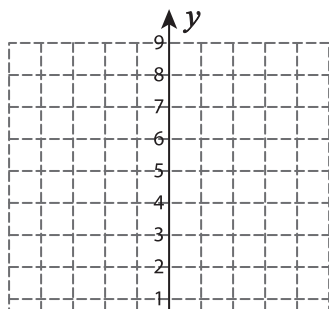
1) $f(x) = x^2 - 8x + 12$

x	2	3	4	5	6
$f(x)$					



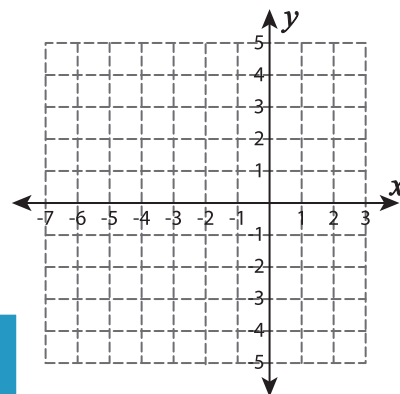
2) $f(x) = x^2 - 4x + 8$

x	0	1	2	3	4
$f(x)$					



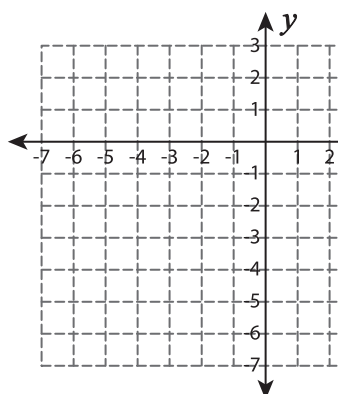
3) $f(x) = -(x + 3)^2 + 4$

x	-5	-4	-3	-2	-1
$f(x)$					



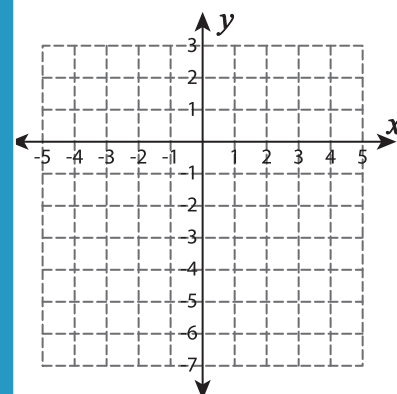
4) $f(x) = -(x + 4)^2 - 2$

x	-6	-5	-4	-3
$f(x)$				



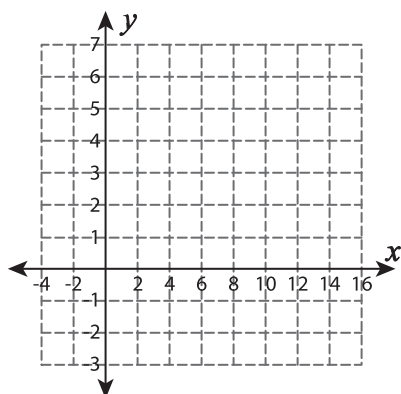
5) $f(x) = x^2 - 6$

x	-2	-1	0	1	2
$f(x)$					

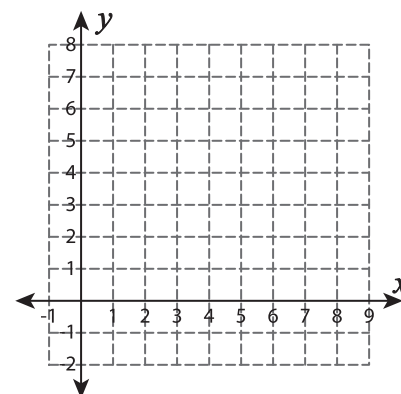


7) $f(x) = (x - 7)^2$

x	5	6	7	8
$f(x)$				

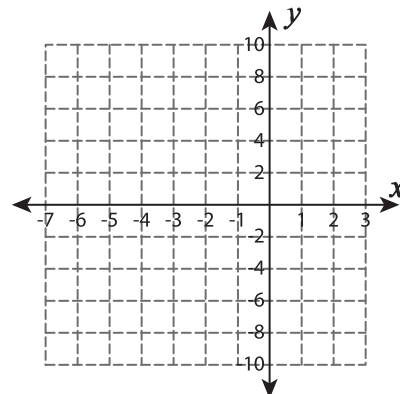


$f(x)$					
--------	--	--	--	--	--



6) $f(x) = -x^2 - 6x$

x	-5	-4	-3	-2	-1
$f(x)$					



PREVIEW

Gain complete access to the largest collection of worksheets in all subjects!

Members, please log in to download this worksheet.

Not a member? Please sign up to gain complete access.

www.mathworksheets4kids.com