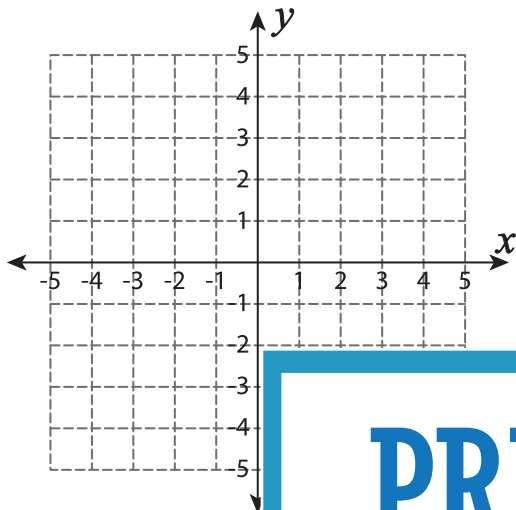


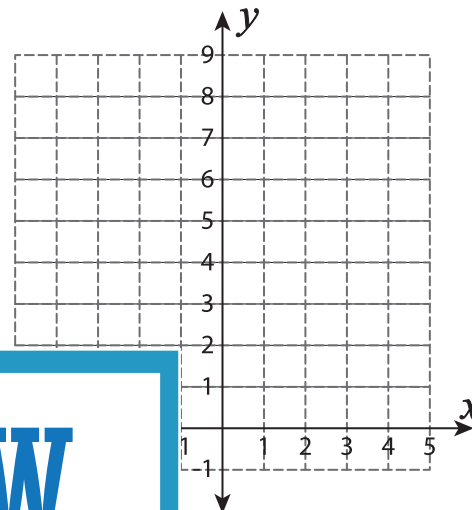
Graphing Quadratic Inequalities

Graph each inequality.

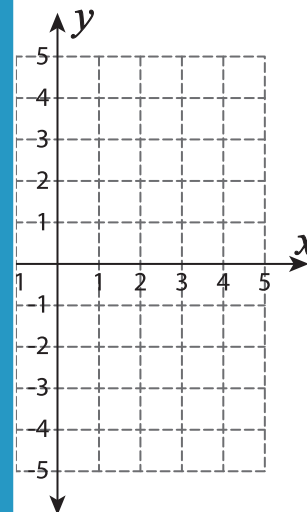
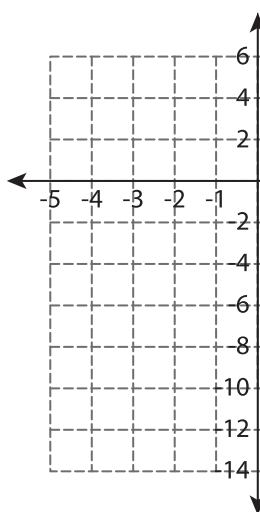
1) $y > 4x^2 - 4$



2) $y \leq -2x^2 + 4x + 6$



3) $y < 3x^2 - 6x - 1$



PREVIEW

Gain complete access to the largest collection of worksheets in all subjects!

Members, please log in to download this worksheet.

Not a member? Please sign up to gain complete access.

www.mathworksheets4kids.com

5) $y \geq -4x^2 - 16x - 1$

