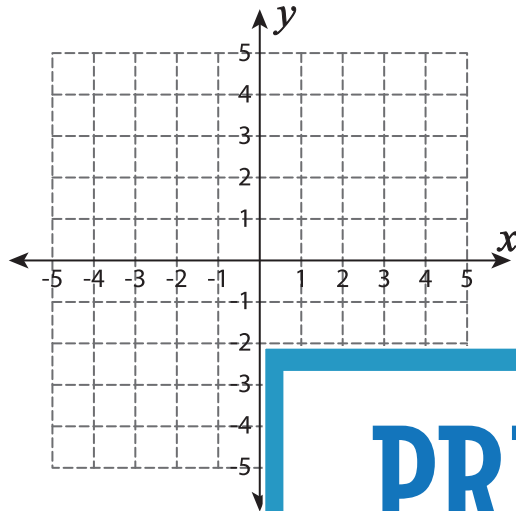


# Graphing Quadratic Inequalities

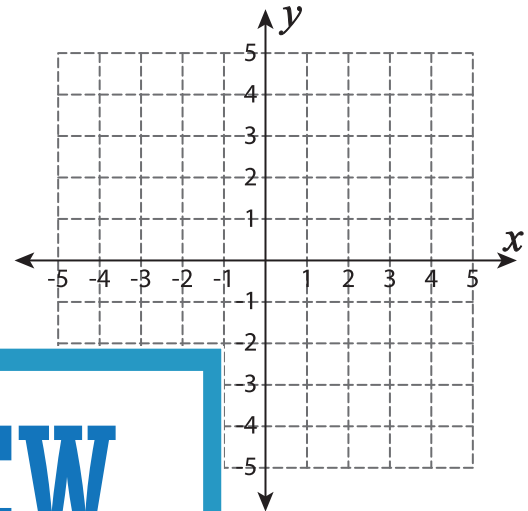
Sheet 3

Graph each inequality.

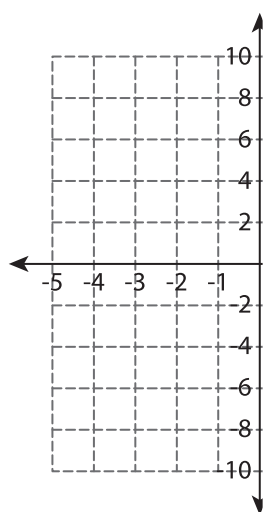
1)  $y \geq 2x^2$



2)  $y > -3x^2 + 12x - 9$



3)  $y \leq 4x^2 + 16x$



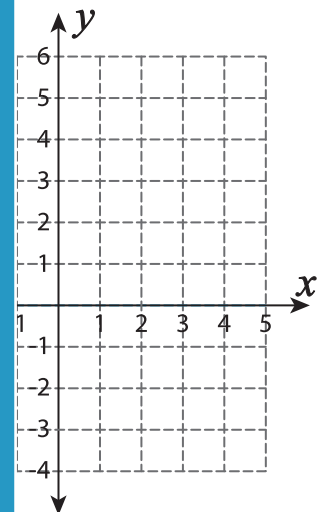
**PREVIEW**

Gain complete access to the largest collection of worksheets in all subjects!

Members, please log in to download this worksheet.

Not a member? Please sign up to gain complete access.

[www.mathworksheets4kids.com](http://www.mathworksheets4kids.com)



5)  $y > -3x^2 - 18$

