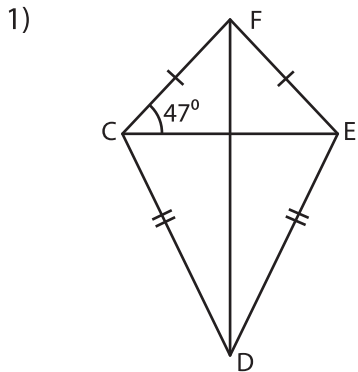
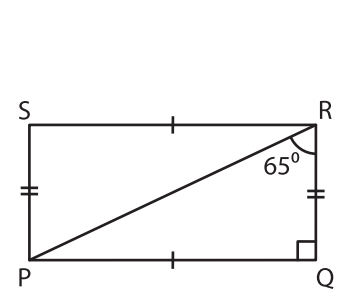
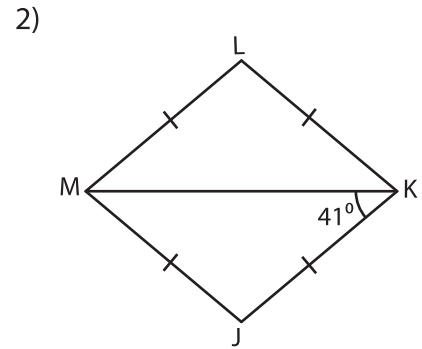


Quadrilateral - Angles

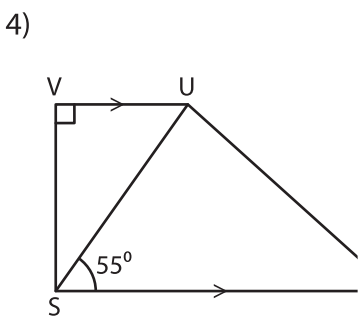
A) Find the measure of the indicated angle in each quadrilateral.



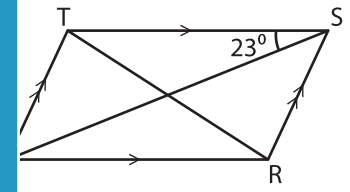
$m\angle CEF =$ _____



$m\angle PRS =$ _____



$m\angle USV =$ _____



$m\angle SQR =$ _____

PREVIEW

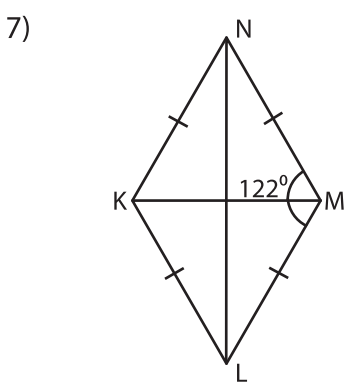
Gain complete access to the largest collection of worksheets in all subjects!

Members, please log in to download this worksheet.

Not a member? Please sign up to gain complete access.

www.mathworksheets4kids.com

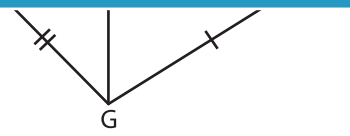
B) Find the measure of the indicated angle in each quadrilateral.



$m\angle KML =$ _____

$m\angle LNK =$ _____

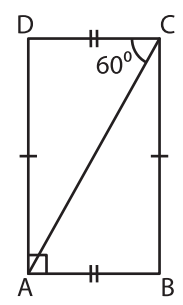
$m\angle KNM =$ _____



$m\angle EGH =$ _____

$m\angle FHE =$ _____

$m\angle EHG =$ _____



$m\angle ACB =$ _____

$m\angle CAB =$ _____

$m\angle CDA =$ _____