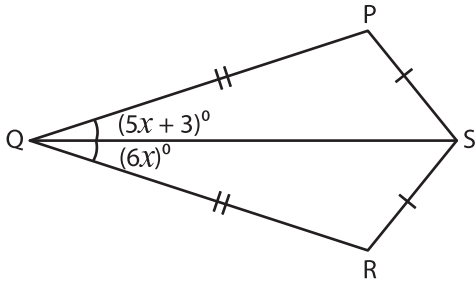


Quadrilateral - Angles

A) Find the measure of the indicated angle in each quadrilateral.

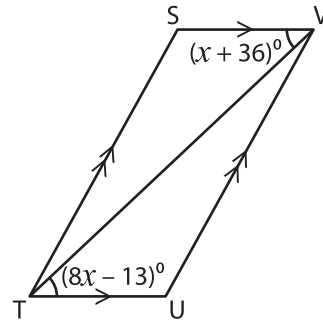
1)



$x =$ _____

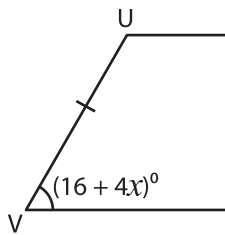
$m\angle Q =$ _____

2)



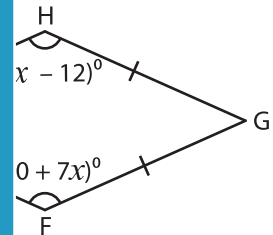
$x =$ _____

3)



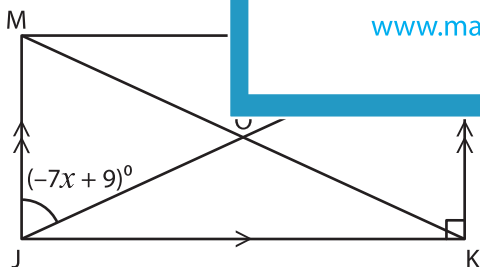
$x =$ _____

$m\angle X =$ _____



B) Find the measure of the indicated angle.

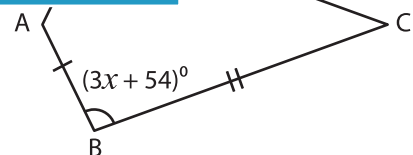
5)



$x =$ _____

$m\angle JLK =$ _____

$m\angle KOL =$ _____



$x =$ _____

$m\angle D =$ _____

$m\angle B =$ _____

PREVIEW

Gain complete access to the largest collection of worksheets in all subjects!

Members, please log in to download this worksheet.

Not a member? Please sign up to gain complete access.

www.mathworksheets4kids.com