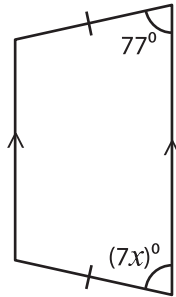


# Quadrilateral - Angles

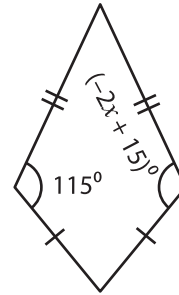
Find the value of  $x$  in each quadrilateral.

1)



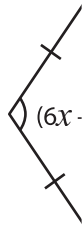
$x =$  \_\_\_\_\_

2)

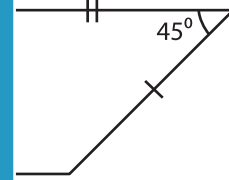


$x =$  \_\_\_\_\_

3)



$x =$  \_\_\_\_\_



\_\_\_\_\_

## PREVIEW

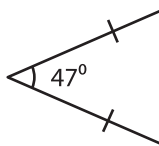
Gain complete access to the largest collection of worksheets in all subjects!

Members, please log in to download this worksheet.

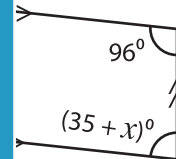
Not a member? Please sign up to gain complete access.

www.mathworksheets4kids.com

5)

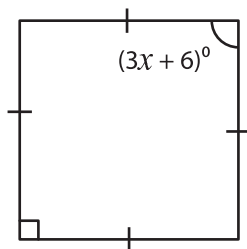


$x =$  \_\_\_\_\_



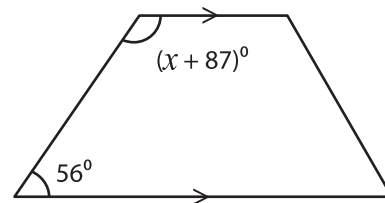
\_\_\_\_\_

7)



$x =$  \_\_\_\_\_

8)



$x =$  \_\_\_\_\_