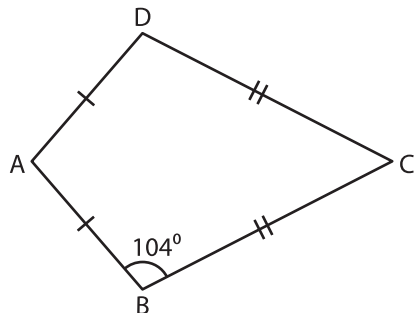


Name : _____

Quadrilateral - Angles

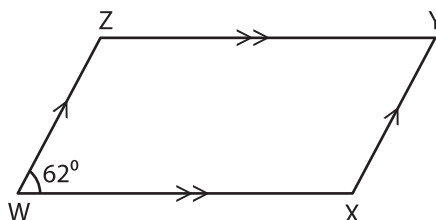
A) Find the measure of the indicated angle in each quadrilateral.

1)

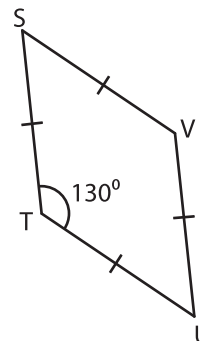


$m\angle D =$ _____

2)

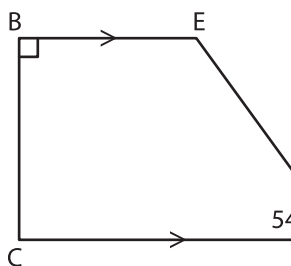


3)



$m\angle S =$ _____

4)



$m\angle E =$ _____

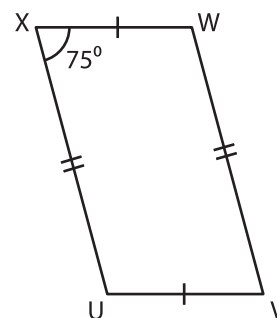
PREVIEW

Gain complete access to the largest collection of worksheets in all subjects!

Members, please log in to download this worksheet.

Not a member? Please sign up to gain complete access.

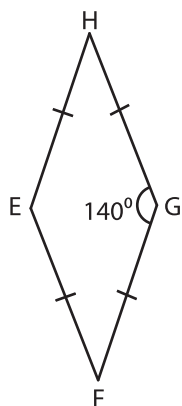
www.mathworksheets4kids.com



$m\angle V =$ _____

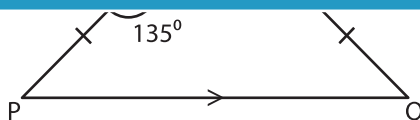
B) Find the measure of the indicated angle in each quadrilateral.

7)



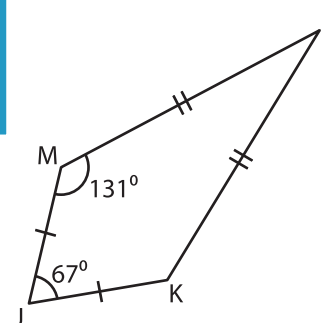
$m\angle H =$ _____

$m\angle E =$ _____



$m\angle R =$ _____

$m\angle Q =$ _____



$m\angle L =$ _____

$m\angle K =$ _____