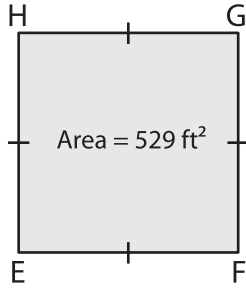


Name : _____

Area - Quadrilateral

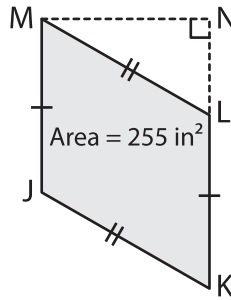
Sheet 2

1)



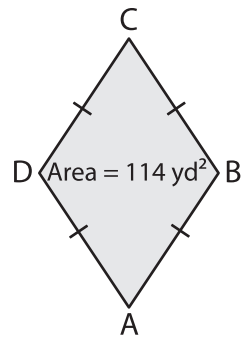
Find EF.

2)



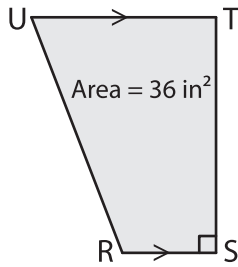
MN = 17 in. Find JM.

3)



DB = 12 yd. Find AC.

4)



RS = 3 in, UT = 5 in
Find ST.

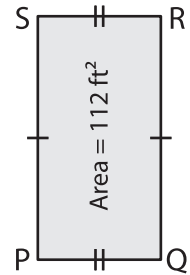
PREVIEW

Gain complete access to the largest collection of worksheets in all subjects!

Members, please log in to download this worksheet.

Not a member? Please sign up to gain complete access.

www.mathworksheets4kids.com



PQ = 7 ft. Find QR.

7) A rectangle has an area

of the length is 29 feet.

8) The base of a parallelogram is 25 inches. Determine the height, if the area of the parallelogram is 450 square inches.