

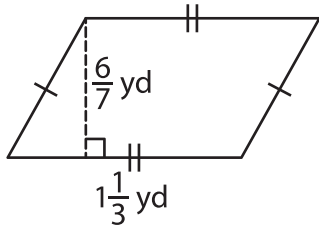
Name : _____

Area – Quadrilateral

L1S1

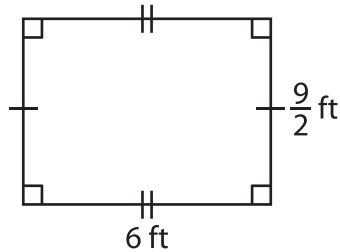
Find the area of each quadrilateral.

1)



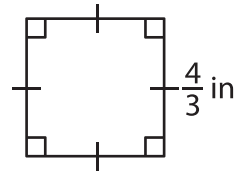
Area = _____

2)



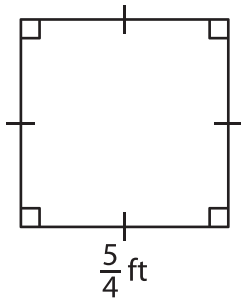
Area = _____

3)



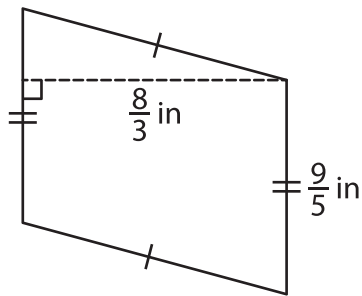
Area = _____

4)



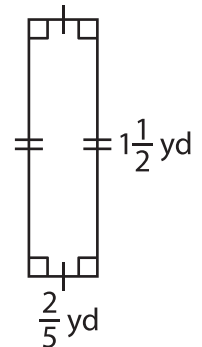
Area = _____

5)



Area = _____

6)



Area = _____

7) The side of a square measures $\frac{1}{6}$ foot. Find the area of the square.

8) What is the area of the rectangle whose length is $\frac{4}{3}$ inches and width is $1\frac{1}{5}$ inches?
