

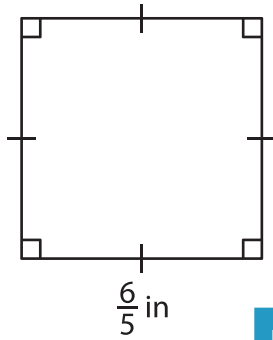
Name : \_\_\_\_\_

## Area – Quadrilateral

L1S2

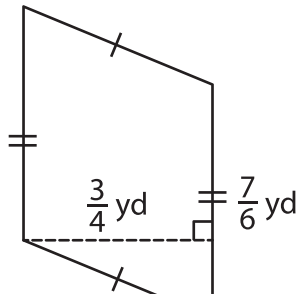
Find the area of each quadrilateral.

1)

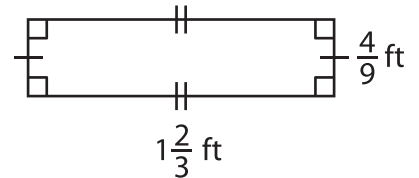


Area = \_\_\_\_\_

2)

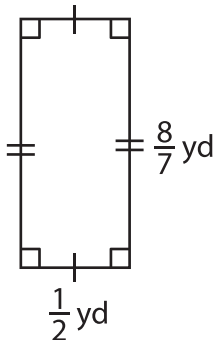


3)



Area = \_\_\_\_\_

4)



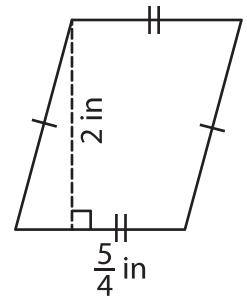
Area = \_\_\_\_\_

Gain complete access to the largest collection of worksheets in all subjects!

Members, please log in to download this worksheet.

Not a member? Please sign up to gain complete access.

[www.mathworksheets4kids.com](http://www.mathworksheets4kids.com)



Area = \_\_\_\_\_

7) Determine the area of a parallelogram with a base of  $\frac{4}{5}$  inch and a height of  $\frac{2}{7}$  inch respectively.

Area = \_\_\_\_\_

8) If the side of a square measures  $\frac{9}{5}$  yards, find the area of the square.