

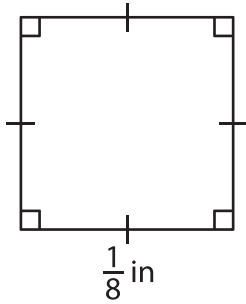
Name : _____

Area – Quadrilateral

L2S1

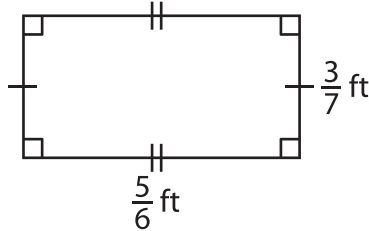
Find the area of each quadrilateral.

1)



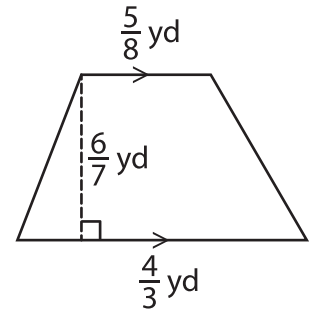
Area = _____

2)

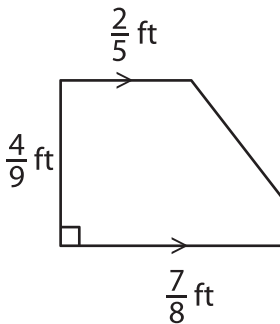


Area = _____

3)



4)



Area = _____

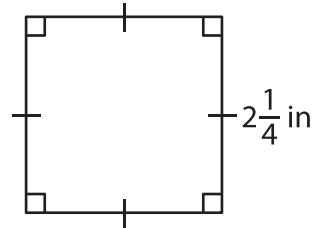
PREVIEW

Gain complete access to the largest collection of worksheets in all subjects!

Members, please log in to download this worksheet.

Not a member? Please sign up to gain complete access.

www.mathworksheets4kids.com



Area = _____

7) Determine the area of a parallelogram with a base of $\frac{6}{5}$ inches and a height of $\frac{7}{5}$ inches respectively.

Area = _____

8) A rectangle is $\frac{3}{5}$ yard long and $\frac{1}{3}$ yard wide. Find the area of the rectangle.