

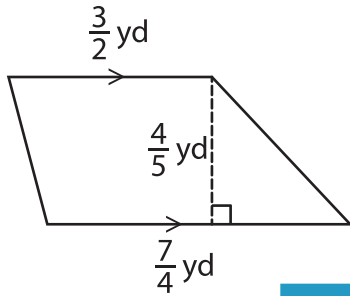
Name : _____

Area – Quadrilateral

L2S3

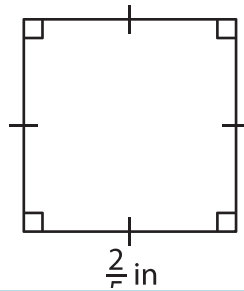
Find the area of each quadrilateral.

1)

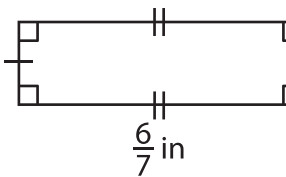


Area = _____

2)



4)

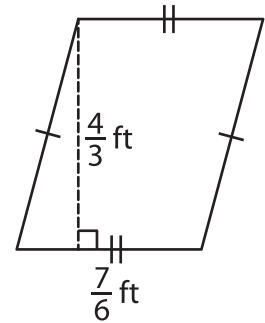


Area = _____

7) The side of a square m

8) The base of a parallelogram is $\frac{8}{3}$ yards and the height is 6 yards. Determine the area of the parallelogram.

3)



Area = _____

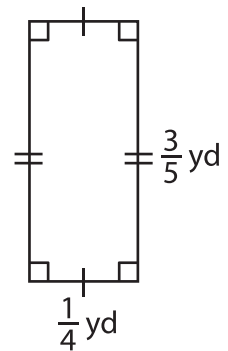
PREVIEW

Gain complete access to the largest collection of worksheets in all subjects!

Members, please log in to download this worksheet.

Not a member? Please sign up to gain complete access.

www.mathworksheets4kids.com



Area = _____