

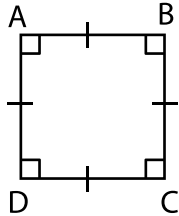
Name : _____

Area – Quadrilateral

L3T1S1

Find the area of each quadrilateral.

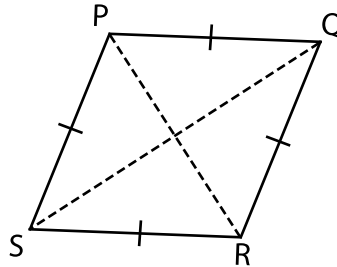
1)



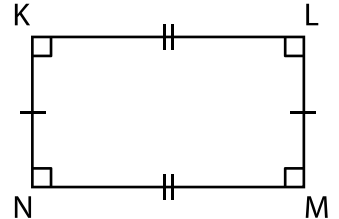
AB = 7 ft

Area = _____

2)



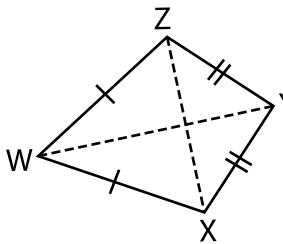
3)



KL = 10 in ; LM = 4 in

Area = _____

4)



WY = 9 yd ; ZX = 6 yd

Area = _____

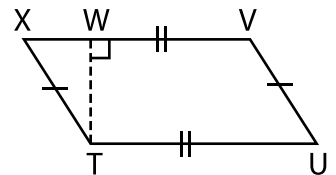
PREVIEW

Gain complete access to the largest collection of worksheets in all subjects!

Members, please log in to download this worksheet.

Not a member? Please sign up to gain complete access.

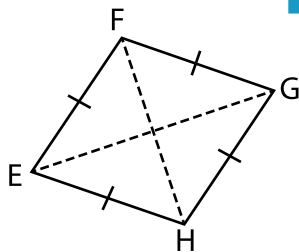
www.mathworksheets4kids.com



XV = 13 ft ; WT = 2 ft

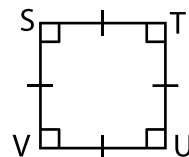
Area = _____

7)



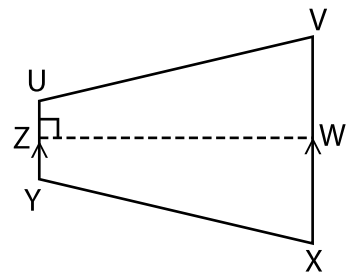
EG = 20 in ; FH = 18 in

Area = _____



ST = 3 ft

Area = _____



YU = 8 yd ; XV = 15 yd ; WZ = 16 yd

Area = _____