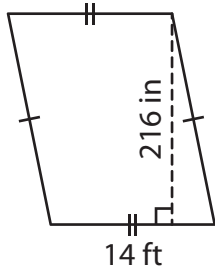


Name : _____

Area of a Quadrilateral

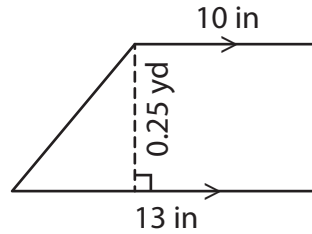
Find the area of each shape. Round your answer to two decimal places.

1)



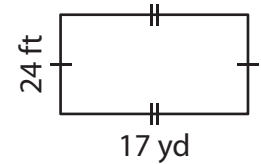
Area = _____

2)

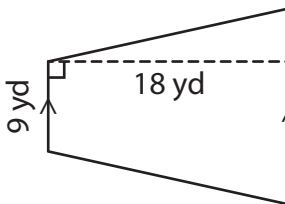


Area = _____ yd²

3)



4)



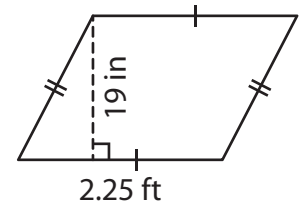
Area = _____

Gain complete access to the largest collection of worksheets in all subjects!

Members, please log in to download this worksheet.

Not a member? Please sign up to gain complete access.

www.mathworksheets4kids.com



Area = _____ in²

7) Find the area of the rectangle.

5 feet.

_____ square inches

8) A parallelogram has a height of 21 feet and a base of 15 yards. What is the area of the parallelogram?

_____ square yards